


NAME: _____

10s



SCORE

BASELINE

CHECK 1

CHECK 2



BASELINE



Name: _____

Date: _____

1. $5 \times 10 =$ _____

21. $8 \times 10 =$ _____

41. $100 \div 10 =$ _____

2. $7 \times 10 =$ _____

22. $5 \times 10 =$ _____

42. $110 \div 10 =$ _____

3. $8 \times 10 =$ _____

23. $3 \times 10 =$ _____

43. $80 \div 10 =$ _____

4. $4 \times 10 =$ _____

24. $4 \times 10 =$ _____

44. $50 \div 10 =$ _____

5. $3 \times 10 =$ _____

25. $6 \times 10 =$ _____

45. $70 \div 10 =$ _____

6. $9 \times 10 =$ _____

26. $9 \times 10 =$ _____

46. $60 \div 10 =$ _____

7. $11 \times 10 =$ _____

27. $10 \times 10 =$ _____

47. $20 \div 10 =$ _____

8. $12 \times 10 =$ _____

28. $7 \times 10 =$ _____

48. $10 \div 10 =$ _____

9. $3 \times 10 =$ _____

29. $2 \times 10 =$ _____

49. $90 \div 10 =$ _____

10. $1 \times 10 =$ _____

30. $1 \times 10 =$ _____

50. $110 \div 10 =$ _____

11. $8 \times 10 =$ _____

31. $20 \div 10 =$ _____

51. $70 \div 10 =$ _____

12. $6 \times 10 =$ _____

32. $40 \div 10 =$ _____

52. $40 \div 10 =$ _____

13. $7 \times 10 =$ _____

33. $50 \div 10 =$ _____

53. $30 \div 10 =$ _____

14. $9 \times 10 =$ _____

34. $90 \div 10 =$ _____

54. $80 \div 10 =$ _____

15. $12 \times 10 =$ _____

35. $100 \div 10 =$ _____

55. $50 \div 10 =$ _____

16. $11 \times 10 =$ _____

36. $120 \div 10 =$ _____

56. $120 \div 10 =$ _____

17. $2 \times 10 =$ _____

37. $70 \div 10 =$ _____

57. $100 \div 10 =$ _____

18. $1 \times 10 =$ _____

38. $60 \div 10 =$ _____

58. $60 \div 10 =$ _____

19. $10 \times 10 =$ _____

39. $30 \div 10 =$ _____

59. $10 \div 10 =$ _____

20. $9 \times 10 =$ _____

40. $10 \div 10 =$ _____

60. $20 \div 10 =$ _____

SCORE:
(5 minute limit)

/60

TIME TAKEN (optional)

MINUTES SECONDS



Name: _____

Date: _____

MULTIPLICATION 1

Practise 10s

Complete first and then use it to help you if you get stuck.

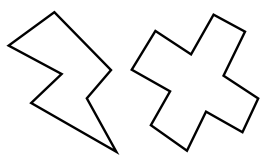
ROCK BOX

1.	$1 \times 10 =$	_____
2.	$2 \times 10 =$	_____
3.	$3 \times 10 =$	_____
4.	$4 \times 10 =$	_____
5.	$5 \times 10 =$	_____
6.	$6 \times 10 =$	_____
7.	$7 \times 10 =$	_____
8.	$8 \times 10 =$	_____
9.	$9 \times 10 =$	_____
10.	$10 \times 10 =$	_____
11.	$11 \times 10 =$	_____
12.	$12 \times 10 =$	_____


- | | | | | | |
|-----|------------------|-------|-----|------------------|-------|
| 21. | $11 \times 10 =$ | _____ | 41. | $9 \times 10 =$ | _____ |
| 22. | $4 \times 10 =$ | _____ | 42. | $5 \times 10 =$ | _____ |
| 23. | $10 \times 10 =$ | _____ | 43. | $3 \times 10 =$ | _____ |
| 24. | $8 \times 10 =$ | _____ | 44. | $2 \times 10 =$ | _____ |
| 25. | $9 \times 10 =$ | _____ | 45. | $12 \times 10 =$ | _____ |
| 26. | $1 \times 10 =$ | _____ | 46. | $10 \times 10 =$ | _____ |
| 27. | $3 \times 10 =$ | _____ | 47. | $11 \times 10 =$ | _____ |
| 28. | $12 \times 10 =$ | _____ | 48. | $1 \times 10 =$ | _____ |
| 29. | $4 \times 10 =$ | _____ | 49. | $5 \times 10 =$ | _____ |
| 30. | $9 \times 10 =$ | _____ | 50. | $7 \times 10 =$ | _____ |
| 31. | $8 \times 10 =$ | _____ | 51. | $8 \times 10 =$ | _____ |
| 32. | $7 \times 10 =$ | _____ | 52. | $11 \times 10 =$ | _____ |
| 33. | $11 \times 10 =$ | _____ | 53. | $10 \times 10 =$ | _____ |
| 34. | $7 \times 10 =$ | _____ | 54. | $6 \times 10 =$ | _____ |
| 35. | $1 \times 10 =$ | _____ | 55. | $9 \times 10 =$ | _____ |
| 36. | $12 \times 10 =$ | _____ | 56. | $4 \times 10 =$ | _____ |
| 37. | $2 \times 10 =$ | _____ | 57. | $3 \times 10 =$ | _____ |
| 38. | $5 \times 10 =$ | _____ | 58. | $6 \times 10 =$ | _____ |
| 39. | $4 \times 10 =$ | _____ | 59. | $9 \times 10 =$ | _____ |
| 40. | $6 \times 10 =$ | _____ | 60. | $11 \times 10 =$ | _____ |

Continue here...

- | | | |
|-----|------------------|-------|
| 13. | $7 \times 10 =$ | _____ |
| 14. | $12 \times 10 =$ | _____ |
| 15. | $8 \times 10 =$ | _____ |
| 16. | $12 \times 10 =$ | _____ |
| 17. | $10 \times 10 =$ | _____ |
| 18. | $9 \times 10 =$ | _____ |
| 19. | $11 \times 10 =$ | _____ |
| 20. | $3 \times 10 =$ | _____ |



SCORE: _____



Grown-ups:
Can learners spot links between neighbouring questions?



Name: _____

Date: _____

MULTIPLICATION 2

Practise 10s

Complete first and then use it to help you if you get stuck.

ROCK BOX

1. $1 \times 10 =$ _____

2. $2 \times 10 =$ _____

3. $3 \times 10 =$ _____

4. $4 \times 10 =$ _____

5. $5 \times 10 =$ _____

6. $6 \times 10 =$ _____

7. $7 \times 10 =$ _____

8. $8 \times 10 =$ _____

9. $9 \times 10 =$ _____

10. $10 \times 10 =$ _____

11. $11 \times 10 =$ _____

12. $12 \times 10 =$ _____

13. $10 \times 1 =$ _____

14. $10 \times 2 =$ _____

15. $10 \times 3 =$ _____

16. $10 \times 4 =$ _____

17. $10 \times 5 =$ _____

18. $10 \times 6 =$ _____

19. $10 \times 7 =$ _____

20. $10 \times 8 =$ _____

21. $10 \times 9 =$ _____

22. $10 \times 10 =$ _____

23. $10 \times 11 =$ _____

24. $10 \times 12 =$ _____

41. $10 \times 3 =$ _____

42. $5 \times 10 =$ _____

43. $10 \times 8 =$ _____

44. $7 \times 10 =$ _____

45. $8 \times 10 =$ _____

46. $10 \times 12 =$ _____

47. $4 \times 10 =$ _____

48. $10 \times 2 =$ _____

49. $1 \times 10 =$ _____

50. $10 \times 5 =$ _____

51. $10 \times 11 =$ _____

52. $10 \times 1 =$ _____

53. $10 \times 12 =$ _____

54. $10 \times 7 =$ _____

55. $10 \times 9 =$ _____

56. $10 \times 6 =$ _____

57. $10 \times 5 =$ _____

58. $10 \times 10 =$ _____

59. $10 \times 3 =$ _____

60. $3 \times 10 =$ _____

Continue here...

25. $10 \times 4 =$ _____

26. $1 \times 10 =$ _____

27. $10 \times 5 =$ _____

28. $6 \times 10 =$ _____

29. $10 \times 6 =$ _____

30. $5 \times 10 =$ _____

31. $10 \times 2 =$ _____

32. $4 \times 10 =$ _____

33. $10 \times 7 =$ _____

34. $10 \times 8 =$ _____

35. $9 \times 10 =$ _____

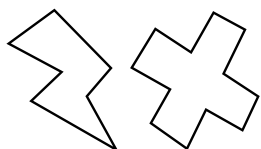
36. $10 \times 11 =$ _____

37. $12 \times 10 =$ _____

38. $11 \times 10 =$ _____

39. $2 \times 10 =$ _____

40. $10 \times 1 =$ _____



SCORE:

Grown-ups:
Can learners spot links between neighbouring questions?



Name: _____

Date: _____

MISSING NUMBER 1

Practise 10s

Complete first and then use it to help you if you get stuck.

ROCK BOX

1. _____ $\times 10 = 10$

2. _____ $\times 10 = 20$

3. _____ $\times 10 = 30$

4. _____ $\times 10 = 40$

5. _____ $\times 10 = 50$

6. _____ $\times 10 = 60$

7. _____ $\times 10 = 70$

8. _____ $\times 10 = 80$

9. _____ $\times 10 = 90$

10. _____ $\times 10 = 100$

11. _____ $\times 10 = 110$

12. _____ $\times 10 = 120$

21. _____ $\times 10 = 50$

22. _____ $\times 10 = 20$

23. _____ $\times 10 = 60$

24. _____ $\times 10 = 120$

25. _____ $\times 10 = 100$

26. _____ $\times 10 = 90$

27. _____ $\times 10 = 110$

28. _____ $\times 10 = 70$

29. _____ $\times 10 = 40$

30. _____ $\times 10 = 30$

31. _____ $\times 10 = 10$

32. _____ $\times 10 = 110$

33. _____ $\times 10 = 80$

34. _____ $\times 10 = 50$

35. _____ $\times 10 = 10$

36. _____ $\times 10 = 40$

37. _____ $\times 10 = 60$

38. _____ $\times 10 = 70$

39. _____ $\times 10 = 90$

40. _____ $\times 10 = 120$

41. _____ $\times 10 = 20$

42. _____ $\times 10 = 30$

42. _____ $\times 10 = 10$

44. _____ $\times 10 = 50$

45. _____ $\times 10 = 70$

46. _____ $\times 10 = 40$

47. _____ $\times 10 = 80$

48. _____ $\times 10 = 120$

49. _____ $\times 10 = 100$

50. _____ $\times 10 = 90$

51. _____ $\times 10 = 60$

52. _____ $\times 10 = 30$

53. _____ $\times 10 = 110$

54. _____ $\times 10 = 10$

55. _____ $\times 10 = 20$

56. _____ $\times 10 = 70$

57. _____ $\times 10 = 50$

58. _____ $\times 10 = 80$

59. _____ $\times 10 = 90$

60. _____ $\times 10 = 100$

Continue here...

13. _____ $\times 10 = 40$

14. _____ $\times 10 = 10$

15. _____ $\times 10 = 100$

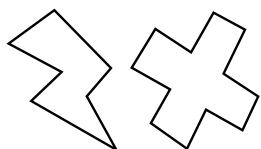
16. _____ $\times 10 = 90$

17. _____ $\times 10 = 120$

18. _____ $\times 10 = 110$

19. _____ $\times 10 = 80$

20. _____ $\times 10 = 70$



SCORE:

Grown-ups:
Can learners spot links between neighbouring questions?



Name: _____

Date: _____

MISSING NUMBER 2

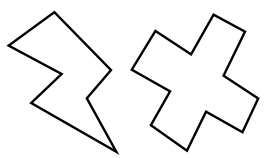
Practise 10s

Complete first and then use it to help you if you get stuck.

ROCK BOX			
1.	$\times 10 = 10$	2.	$\times 1 = 10$
3.	$\times 10 = 20$	4.	$\times 2 = 20$
5.	$\times 10 = 30$	6.	$\times 3 = 30$
7.	$\times 10 = 40$	8.	$\times 4 = 40$
9.	$\times 10 = 50$	10.	$\times 5 = 50$
11.	$\times 10 = 60$	12.	$\times 6 = 60$
13.	$\times 10 = 70$	14.	$\times 7 = 70$
15.	$\times 10 = 80$	16.	$\times 8 = 80$
17.	$\times 10 = 90$	18.	$\times 9 = 90$
19.	$\times 10 = 100$	20.	$\times 10 = 100$
21.	$\times 10 = 110$	22.	$\times 11 = 110$
23.	$\times 10 = 120$	24.	$\times 12 = 120$

Continue here...

- | | | |
|-----------------------------|-----------------------------|-----------------------------|
| 25. _____ $\times 10 = 90$ | 33. _____ $\times 1 = 10$ | 41. _____ $\times 4 = 40$ |
| 26. _____ $\times 9 = 90$ | 34. _____ $\times 11 = 110$ | 42. _____ $\times 10 = 20$ |
| 27. _____ $\times 10 = 60$ | 35. _____ $\times 9 = 90$ | 43. _____ $\times 10 = 80$ |
| 28. _____ $\times 7 = 70$ | 36. _____ $\times 10 = 120$ | 44. _____ $\times 12 = 120$ |
| 29. _____ $\times 8 = 80$ | 37. _____ $\times 10 = 70$ | 45. _____ $\times 6 = 60$ |
| 30. _____ $\times 10 = 110$ | 38. _____ $\times 5 = 50$ | 46. _____ $\times 7 = 70$ |
| 31. _____ $\times 12 = 120$ | 39. _____ $\times 10 = 60$ | 47. _____ $\times 10 = 90$ |
| 32. _____ $\times 10 = 10$ | 40. _____ $\times 3 = 30$ | 48. _____ $\times 11 = 110$ |
| | | 49. _____ $\times 10 = 100$ |
| | | 50. _____ $\times 10 = 10$ |
| | | 51. _____ $\times 10 = 120$ |
| | | 52. _____ $\times 10 = 30$ |
| | | 53. _____ $\times 10 = 40$ |
| | | 54. _____ $\times 10 = 50$ |
| | | 55. _____ $\times 10 = 100$ |
| | | 56. _____ $\times 2 = 20$ |
| | | 57. _____ $\times 8 = 80$ |
| | | 58. _____ $\times 1 = 10$ |
| | | 59. _____ $\times 9 = 90$ |
| | | 60. _____ $\times 12 = 120$ |



SCORE:

Grown-ups:
Can learners spot links between neighbouring questions?



Name: _____

Date: _____

DIVISION 1

Practise 10s

Complete first and then use it to help you if you get stuck.

ROCK BOX

1. $10 \div 10 =$ _____

2. $20 \div 10 =$ _____

3. $30 \div 10 =$ _____

4. $40 \div 10 =$ _____

5. $50 \div 10 =$ _____

6. $60 \div 10 =$ _____

7. $70 \div 10 =$ _____

8. $80 \div 10 =$ _____

9. $90 \div 10 =$ _____

10. $100 \div 10 =$ _____

11. $110 \div 10 =$ _____

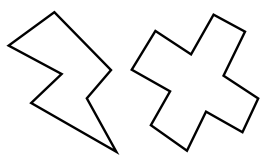
12. $120 \div 10 =$ _____

21. $110 \div 10 =$ _____
22. $90 \div 10 =$ _____
23. $50 \div 10 =$ _____
24. $40 \div 10 =$ _____
25. $30 \div 10 =$ _____
26. $60 \div 10 =$ _____
27. $120 \div 10 =$ _____
28. $80 \div 10 =$ _____
29. $40 \div 10 =$ _____
30. $100 \div 10 =$ _____
31. $110 \div 10 =$ _____
32. $90 \div 10 =$ _____
33. $70 \div 10 =$ _____
34. $10 \div 10 =$ _____
35. $50 \div 10 =$ _____
36. $80 \div 10 =$ _____
37. $120 \div 10 =$ _____
38. $30 \div 10 =$ _____
39. $10 \div 10 =$ _____
40. $60 \div 10 =$ _____

41. $90 \div 10 =$ _____
42. $80 \div 10 =$ _____
43. $20 \div 10 =$ _____
44. $60 \div 10 =$ _____
45. $70 \div 10 =$ _____
46. $60 \div 10 =$ _____
47. $50 \div 10 =$ _____
48. $80 \div 10 =$ _____
49. $20 \div 10 =$ _____
50. $10 \div 10 =$ _____
51. $40 \div 10 =$ _____
52. $90 \div 10 =$ _____
53. $30 \div 10 =$ _____
54. $80 \div 10 =$ _____
55. $110 \div 10 =$ _____
56. $100 \div 10 =$ _____
57. $120 \div 10 =$ _____
58. $70 \div 10 =$ _____
59. $50 \div 10 =$ _____
60. $60 \div 10 =$ _____

Continue here...

13. $120 \div 10 =$ _____
14. $80 \div 10 =$ _____
15. $100 \div 10 =$ _____
16. $60 \div 10 =$ _____
17. $110 \div 10 =$ _____
18. $10 \div 10 =$ _____
19. $30 \div 10 =$ _____
20. $70 \div 10 =$ _____



SCORE: _____

Grown-ups:
Can learners spot links between neighbouring questions?



Name: _____

Date: _____

DIVISION 2

Practise 10s

Complete first and then use it to help you if you get stuck

ROCK BOX

1. $10 \div 10 =$

2. $10 \div 1 =$

3. $20 \div 10 =$

4. $20 \div 2 =$

5. $30 \div 10 =$

6. $30 \div 3 =$

7. $40 \div 10 =$

8. $40 \div 4 =$

9. $50 \div 10 =$

10. $50 \div 5 =$

11. $60 \div 10 =$

12. $60 \div 6 =$

13. $70 \div 10 =$

14. $70 \div 7 =$

15. $80 \div 10 =$

16. $80 \div 8 =$

17. $90 \div 10 =$

18. $90 \div 9 =$

19. $100 \div 10 =$

20. $100 \div 10 =$

21. $110 \div 10 =$

22. $110 \div 11 =$

23. $120 \div 10 =$

24. $120 \div 12 =$

41. $80 \div 8 =$

42. $60 \div 6 =$

43. $50 \div 10 =$

44. $120 \div 12 =$

45. $100 \div 10 =$

46. $30 \div 10 =$

47. $70 \div 10 =$

48. $10 \div 1 =$

49. $110 \div 10 =$

50. $40 \div 4 =$

51. $40 \div 10 =$

52. $80 \div 10 =$

53. $90 \div 9 =$

54. $80 \div 8 =$

55. $100 \div 10 =$

56. $60 \div 10 =$

57. $20 \div 2 =$

58. $30 \div 3 =$

59. $70 \div 10 =$

60. $50 \div 5 =$

Continue here...

25. $50 \div 5 =$

33. $60 \div 6 =$

26. $30 \div 10 =$

34. $50 \div 10 =$

27. $50 \div 10 =$

35. $60 \div 10 =$

28. $100 \div 10 =$

36. $90 \div 9 =$

29. $30 \div 3 =$

37. $110 \div 11 =$

30. $10 \div 10 =$

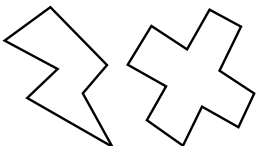
38. $90 \div 10 =$

31. $10 \div 1 =$

39. $40 \div 10 =$

32. $20 \div 10 =$

40. $70 \div 7 =$



SCORE:

Grown-ups:
Can learners spot links between neighbouring questions?





CHECK 1



Name: _____

Date: _____

1. $8 \times 10 =$ _____

21. $8 \times 10 =$ _____

41. $20 \div 10 =$ _____

2. $2 \times 10 =$ _____

22. $10 \times 10 =$ _____

42. $100 \div 10 =$ _____

3. $5 \times 10 =$ _____

23. $12 \times 10 =$ _____

43. $80 \div 10 =$ _____

4. $4 \times 10 =$ _____

24. $9 \times 10 =$ _____

44. $10 \div 10 =$ _____

5. $3 \times 10 =$ _____

25. $2 \times 10 =$ _____

45. $50 \div 10 =$ _____

6. $6 \times 10 =$ _____

26. $1 \times 10 =$ _____

46. $90 \div 10 =$ _____

7. $7 \times 10 =$ _____

27. $5 \times 10 =$ _____

47. $70 \div 10 =$ _____

8. $10 \times 10 =$ _____

28. $4 \times 10 =$ _____

48. $10 \div 10 =$ _____

9. $12 \times 10 =$ _____

29. $3 \times 10 =$ _____

49. $100 \div 10 =$ _____

10. $1 \times 10 =$ _____

30. $6 \times 10 =$ _____

50. $120 \div 10 =$ _____

11. $9 \times 10 =$ _____

31. $30 \div 10 =$ _____

51. $40 \div 10 =$ _____

12. $2 \times 10 =$ _____

32. $60 \div 10 =$ _____

52. $60 \div 10 =$ _____

13. $11 \times 10 =$ _____

33. $90 \div 10 =$ _____

53. $50 \div 10 =$ _____

14. $7 \times 10 =$ _____

34. $50 \div 10 =$ _____

54. $30 \div 10 =$ _____

15. $9 \times 10 =$ _____

35. $100 \div 10 =$ _____

55. $100 \div 10 =$ _____

16. $4 \times 10 =$ _____

36. $10 \div 10 =$ _____

56. $110 \div 10 =$ _____

17. $3 \times 10 =$ _____

37. $110 \div 10 =$ _____

57. $90 \div 10 =$ _____

18. $6 \times 10 =$ _____

38. $120 \div 10 =$ _____

58. $10 \div 10 =$ _____

19. $1 \times 10 =$ _____

39. $80 \div 10 =$ _____

59. $20 \div 10 =$ _____

20. $5 \times 10 =$ _____

40. $40 \div 10 =$ _____

60. $40 \div 10 =$ _____

SCORE:
(5 minute limit)

/60

TIME TAKEN (optional)

MINUTES SECONDS



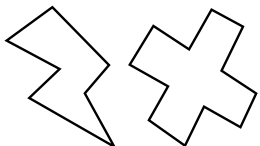
Name: _____

Date: _____

MULTIPLICATION 3

Practise 10s

- | | | | | | |
|-----|------------------------|-----|------------------------|-----|------------------------|
| 1. | $10 \times 5 =$ _____ | 21. | $10 \times 8 =$ _____ | 41. | $1 \times 10 =$ _____ |
| 2. | $10 \times 3 =$ _____ | 22. | $10 \times 1 =$ _____ | 42. | $10 \times 12 =$ _____ |
| 3. | $3 \times 10 =$ _____ | 23. | $10 \times 2 =$ _____ | 43. | $11 \times 10 =$ _____ |
| 4. | $10 \times 7 =$ _____ | 24. | $4 \times 10 =$ _____ | 44. | $10 \times 7 =$ _____ |
| 5. | $10 \times 4 =$ _____ | 25. | $10 \times 6 =$ _____ | 45. | $10 \times 1 =$ _____ |
| 6. | $7 \times 10 =$ _____ | 26. | $9 \times 10 =$ _____ | 46. | $10 \times 3 =$ _____ |
| 7. | $5 \times 10 =$ _____ | 27. | $10 \times 12 =$ _____ | 47. | $12 \times 10 =$ _____ |
| 8. | $10 \times 8 =$ _____ | 28. | $11 \times 10 =$ _____ | 48. | $9 \times 10 =$ _____ |
| 9. | $9 \times 10 =$ _____ | 29. | $10 \times 1 =$ _____ | 49. | $10 \times 6 =$ _____ |
| 10. | $10 \times 11 =$ _____ | 30. | $10 \times 10 =$ _____ | 50. | $3 \times 10 =$ _____ |
| 11. | $12 \times 10 =$ _____ | 31. | $10 \times 11 =$ _____ | 51. | $5 \times 10 =$ _____ |
| 12. | $10 \times 12 =$ _____ | 32. | $10 \times 5 =$ _____ | 52. | $10 \times 10 =$ _____ |
| 13. | $1 \times 10 =$ _____ | 33. | $10 \times 3 =$ _____ | 53. | $10 \times 5 =$ _____ |
| 14. | $10 \times 10 =$ _____ | 34. | $10 \times 2 =$ _____ | 54. | $8 \times 10 =$ _____ |
| 15. | $10 \times 7 =$ _____ | 35. | $7 \times 10 =$ _____ | 55. | $10 \times 2 =$ _____ |
| 16. | $6 \times 10 =$ _____ | 36. | $10 \times 4 =$ _____ | 56. | $10 \times 4 =$ _____ |
| 17. | $3 \times 10 =$ _____ | 37. | $10 \times 3 =$ _____ | 57. | $7 \times 10 =$ _____ |
| 18. | $1 \times 10 =$ _____ | 38. | $2 \times 10 =$ _____ | 58. | $9 \times 10 =$ _____ |
| 19. | $4 \times 10 =$ _____ | 39. | $9 \times 10 =$ _____ | 59. | $10 \times 8 =$ _____ |
| 20. | $8 \times 10 =$ _____ | 40. | $10 \times 8 =$ _____ | 60. | $6 \times 10 =$ _____ |



SCORE:



Grown-ups:
Can learners spot links between neighbouring questions?



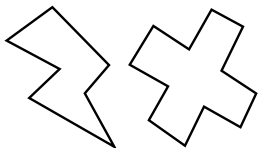
Name: _____

MISSING NUMBERS 3

Date: _____

Practise 10s

- | | | |
|----------------------|----------------------|----------------------|
| 1. _____ × 10 = 110 | 21. _____ × 10 = 40 | 41. _____ × 10 = 10 |
| 2. _____ × 10 = 120 | 22. _____ × 12 = 120 | 42. _____ × 11 = 110 |
| 3. _____ × 7 = 70 | 23. _____ × 10 = 80 | 43. _____ × 10 = 80 |
| 4. _____ × 10 = 50 | 24. _____ × 7 = 70 | 44. _____ × 9 = 90 |
| 5. _____ × 9 = 90 | 25. _____ × 5 = 50 | 45. _____ × 10 = 90 |
| 6. _____ × 6 = 60 | 26. _____ × 6 = 60 | 46. _____ × 10 = 100 |
| 7. _____ × 10 = 60 | 27. _____ × 10 = 20 | 47. _____ × 10 = 40 |
| 8. _____ × 4 = 40 | 28. _____ × 1 = 10 | 48. _____ × 2 = 20 |
| 9. _____ × 9 = 90 | 29. _____ × 10 = 100 | 49. _____ × 1 = 10 |
| 10. _____ × 3 = 30 | 30. _____ × 10 = 110 | 50. _____ × 10 = 80 |
| 11. _____ × 10 = 20 | 31. _____ × 9 = 90 | 51. _____ × 6 = 60 |
| 12. _____ × 1 = 10 | 32. _____ × 4 = 40 | 52. _____ × 4 = 40 |
| 13. _____ × 10 = 10 | 33. _____ × 10 = 30 | 53. _____ × 10 = 50 |
| 14. _____ × 10 = 100 | 34. _____ × 10 = 100 | 54. _____ × 10 = 70 |
| 15. _____ × 10 = 110 | 35. _____ × 10 = 30 | 55. _____ × 9 = 90 |
| 16. _____ × 7 = 70 | 36. _____ × 5 = 50 | 56. _____ × 10 = 110 |
| 17. _____ × 5 = 50 | 37. _____ × 10 = 90 | 57. _____ × 12 = 120 |
| 18. _____ × 8 = 80 | 38. _____ × 4 = 40 | 58. _____ × 10 = 120 |
| 19. _____ × 10 = 40 | 39. _____ × 10 = 10 | 59. _____ × 10 = 30 |
| 20. _____ × 10 = 70 | 40. _____ × 6 = 60 | 60. _____ × 9 = 90 |



SCORE:

Grown-ups:
Can learners spot links between neighbouring questions?



Name: _____

Date: _____

DIVISION 3

Practise 10s

1. $70 \div 7 =$ _____

21. $120 \div 10 =$ _____

41. $80 \div 10 =$ _____

2. $70 \div 10 =$ _____

22. $60 \div 10 =$ _____

42. $90 \div 10 =$ _____

3. $30 \div 3 =$ _____

23. $90 \div 10 =$ _____

43. $70 \div 7 =$ _____

4. $20 \div 2 =$ _____

24. $70 \div 7 =$ _____

44. $110 \div 11 =$ _____

5. $20 \div 10 =$ _____

25. $30 \div 10 =$ _____

45. $110 \div 10 =$ _____

6. $40 \div 4 =$ _____

26. $100 \div 10 =$ _____

46. $10 \div 1 =$ _____

7. $100 \div 10 =$ _____

27. $50 \div 5 =$ _____

47. $100 \div 10 =$ _____

8. $110 \div 11 =$ _____

28. $70 \div 10 =$ _____

48. $90 \div 9 =$ _____

9. $110 \div 10 =$ _____

29. $40 \div 4 =$ _____

49. $80 \div 8 =$ _____

10. $70 \div 10 =$ _____

30. $60 \div 10 =$ _____

50. $40 \div 10 =$ _____

11. $50 \div 5 =$ _____

31. $40 \div 10 =$ _____

51. $40 \div 4 =$ _____

12. $120 \div 12 =$ _____

32. $30 \div 3 =$ _____

52. $60 \div 10 =$ _____

13. $120 \div 10 =$ _____

33. $90 \div 9 =$ _____

53. $30 \div 10 =$ _____

14. $80 \div 10 =$ _____

34. $100 \div 10 =$ _____

54. $70 \div 10 =$ _____

15. $110 \div 10 =$ _____

35. $110 \div 10 =$ _____

55. $30 \div 3 =$ _____

16. $50 \div 10 =$ _____

36. $100 \div 10 =$ _____

56. $120 \div 10 =$ _____

17. $60 \div 6 =$ _____

37. $120 \div 12 =$ _____

57. $60 \div 10 =$ _____

18. $30 \div 10 =$ _____

38. $10 \div 1 =$ _____

58. $50 \div 10 =$ _____

19. $30 \div 3 =$ _____

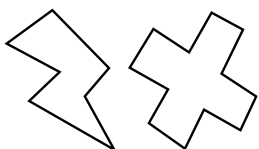
39. $10 \div 10 =$ _____

59. $20 \div 2 =$ _____

20. $90 \div 9 =$ _____

40. $80 \div 8 =$ _____

60. $20 \div 10 =$ _____



SCORE:

Grown-ups:
Can learners spot links between neighbouring questions?



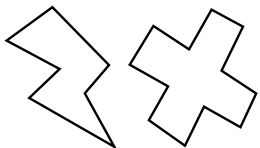
Name: _____

Date: _____

MULTIPLICATION 4

Practise 10s

- | | | |
|----------------------------|----------------------------|----------------------------|
| 1. $12 \times 10 =$ _____ | 21. $1 \times 10 =$ _____ | 41. $10 \times 3 =$ _____ |
| 2. $11 \times 10 =$ _____ | 22. $10 \times 4 =$ _____ | 42. $10 \times 2 =$ _____ |
| 3. $10 \times 8 =$ _____ | 23. $4 \times 10 =$ _____ | 43. $8 \times 10 =$ _____ |
| 4. $9 \times 10 =$ _____ | 24. $10 \times 3 =$ _____ | 44. $10 \times 4 =$ _____ |
| 5. $10 \times 7 =$ _____ | 25. $10 \times 6 =$ _____ | 45. $10 \times 2 =$ _____ |
| 6. $10 \times 5 =$ _____ | 26. $9 \times 10 =$ _____ | 46. $1 \times 10 =$ _____ |
| 7. $6 \times 10 =$ _____ | 27. $10 \times 8 =$ _____ | 47. $11 \times 10 =$ _____ |
| 8. $10 \times 4 =$ _____ | 28. $10 \times 10 =$ _____ | 48. $12 \times 10 =$ _____ |
| 9. $3 \times 10 =$ _____ | 29. $11 \times 10 =$ _____ | 49. $10 \times 7 =$ _____ |
| 10. $10 \times 3 =$ _____ | 30. $10 \times 6 =$ _____ | 50. $10 \times 10 =$ _____ |
| 11. $6 \times 10 =$ _____ | 31. $6 \times 10 =$ _____ | 51. $4 \times 10 =$ _____ |
| 12. $7 \times 10 =$ _____ | 32. $9 \times 10 =$ _____ | 52. $10 \times 9 =$ _____ |
| 13. $10 \times 10 =$ _____ | 33. $3 \times 10 =$ _____ | 53. $6 \times 10 =$ _____ |
| 14. $10 \times 12 =$ _____ | 34. $5 \times 10 =$ _____ | 54. $10 \times 8 =$ _____ |
| 15. $11 \times 10 =$ _____ | 35. $10 \times 8 =$ _____ | 55. $4 \times 10 =$ _____ |
| 16. $6 \times 10 =$ _____ | 36. $10 \times 11 =$ _____ | 56. $11 \times 10 =$ _____ |
| 17. $10 \times 8 =$ _____ | 37. $10 \times 10 =$ _____ | 57. $10 \times 3 =$ _____ |
| 18. $10 \times 3 =$ _____ | 38. $1 \times 10 =$ _____ | 58. $10 \times 10 =$ _____ |
| 19. $2 \times 10 =$ _____ | 39. $2 \times 10 =$ _____ | 59. $10 \times 6 =$ _____ |
| 20. $10 \times 1 =$ _____ | 40. $10 \times 5 =$ _____ | 60. $9 \times 10 =$ _____ |



SCORE:

Grown-ups:
Can learners spot links between neighbouring questions?



Name: _____

MISSING NUMBERS 4

Practise 10s

Date: _____

1. _____ \times 10 = 60

21. _____ \times 10 = 50

41. _____ \times 10 = 60

2. _____ \times 9 = 90

22. _____ \times 10 = 40

42. _____ \times 5 = 50

3. _____ \times 8 = 80

23. _____ \times 3 = 30

43. _____ \times 10 = 100

4. _____ \times 4 = 40

24. _____ \times 6 = 60

44. _____ \times 10 = 10

5. _____ \times 10 = 30

25. _____ \times 10 = 70

45. _____ \times 9 = 90

6. _____ \times 10 = 50

26. _____ \times 10 = 50

46. _____ \times 10 = 110

7. _____ \times 6 = 60

27. _____ \times 10 = 90

47. _____ \times 7 = 70

8. _____ \times 10 = 10

28. _____ \times 8 = 80

48. _____ \times 3 = 30

9. _____ \times 10 = 20

29. _____ \times 10 = 10

49. _____ \times 2 = 20

10. _____ \times 10 = 100

30. _____ \times 12 = 120

50. _____ \times 10 = 40

11. _____ \times 12 = 120

31. _____ \times 10 = 30

51. _____ \times 5 = 50

12. _____ \times 10 = 60

32. _____ \times 2 = 20

52. _____ \times 10 = 60

13. _____ \times 10 = 70

33. _____ \times 6 = 60

53. _____ \times 10 = 100

14. _____ \times 1 = 10

34. _____ \times 10 = 20

54. _____ \times 12 = 120

15. _____ \times 10 = 20

35. _____ \times 10 = 10

55. _____ \times 1 = 10

16. _____ \times 10 = 110

36. _____ \times 12 = 120

56. _____ \times 10 = 100

17. _____ \times 9 = 90

37. _____ \times 9 = 90

57. _____ \times 9 = 90

18. _____ \times 10 = 100

38. _____ \times 10 = 40

58. _____ \times 10 = 40

19. _____ \times 6 = 60

39. _____ \times 10 = 30

59. _____ \times 10 = 70

20. _____ \times 10 = 70

40. _____ \times 8 = 80

60. _____ \times 7 = 70



SCORE:

Grown-ups:
Can learners spot links between neighbouring questions?



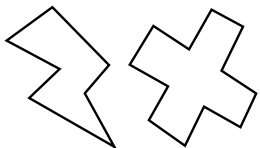
Name: _____

DIVISION 4

Date: _____

Practise 10s

- | | | |
|---------------------------|---------------------------|---------------------------|
| 1. $120 \div 10 =$ _____ | 21. $100 \div 10 =$ _____ | 41. $120 \div 10 =$ _____ |
| 2. $110 \div 10 =$ _____ | 22. $120 \div 10 =$ _____ | 42. $10 \div 1 =$ _____ |
| 3. $10 \div 1 =$ _____ | 23. $110 \div 11 =$ _____ | 43. $10 \div 10 =$ _____ |
| 4. $10 \div 10 =$ _____ | 24. $70 \div 10 =$ _____ | 44. $40 \div 10 =$ _____ |
| 5. $90 \div 9 =$ _____ | 25. $70 \div 7 =$ _____ | 45. $70 \div 7 =$ _____ |
| 6. $80 \div 10 =$ _____ | 26. $40 \div 10 =$ _____ | 46. $70 \div 10 =$ _____ |
| 7. $50 \div 10 =$ _____ | 27. $50 \div 10 =$ _____ | 47. $90 \div 9 =$ _____ |
| 8. $60 \div 6 =$ _____ | 28. $90 \div 10 =$ _____ | 48. $100 \div 10 =$ _____ |
| 9. $70 \div 7 =$ _____ | 29. $90 \div 9 =$ _____ | 49. $110 \div 10 =$ _____ |
| 10. $100 \div 10 =$ _____ | 30. $80 \div 10 =$ _____ | 50. $20 \div 10 =$ _____ |
| 11. $30 \div 3 =$ _____ | 31. $60 \div 10 =$ _____ | 51. $110 \div 11 =$ _____ |
| 12. $20 \div 2 =$ _____ | 32. $40 \div 4 =$ _____ | 52. $30 \div 10 =$ _____ |
| 13. $50 \div 10 =$ _____ | 33. $10 \div 10 =$ _____ | 53. $120 \div 12 =$ _____ |
| 14. $60 \div 10 =$ _____ | 34. $50 \div 5 =$ _____ | 54. $40 \div 10 =$ _____ |
| 15. $90 \div 10 =$ _____ | 35. $70 \div 7 =$ _____ | 55. $70 \div 10 =$ _____ |
| 16. $40 \div 10 =$ _____ | 36. $20 \div 10 =$ _____ | 56. $60 \div 6 =$ _____ |
| 17. $40 \div 4 =$ _____ | 37. $90 \div 9 =$ _____ | 57. $10 \div 10 =$ _____ |
| 18. $80 \div 8 =$ _____ | 38. $30 \div 10 =$ _____ | 58. $20 \div 2 =$ _____ |
| 19. $10 \div 10 =$ _____ | 39. $110 \div 11 =$ _____ | 59. $100 \div 10 =$ _____ |
| 20. $120 \div 12 =$ _____ | 40. $60 \div 6 =$ _____ | 60. $10 \div 1 =$ _____ |



SCORE:

Grown-ups:
Can learners spot links between neighbouring questions?





CHECK 2



Name: _____

Date: _____

1. $9 \times 10 =$ _____

21. $3 \times 10 =$ _____

41. $10 \div 10 =$ _____

2. $4 \times 10 =$ _____

22. $10 \times 10 =$ _____

42. $90 \div 10 =$ _____

3. $12 \times 10 =$ _____

23. $2 \times 10 =$ _____

43. $70 \div 10 =$ _____

4. $3 \times 10 =$ _____

24. $4 \times 10 =$ _____

44. $110 \div 10 =$ _____

5. $6 \times 10 =$ _____

25. $8 \times 10 =$ _____

45. $20 \div 10 =$ _____

6. $10 \times 10 =$ _____

26. $6 \times 10 =$ _____

46. $100 \div 10 =$ _____

7. $12 \times 10 =$ _____

27. $12 \times 10 =$ _____

47. $120 \div 10 =$ _____

8. $2 \times 10 =$ _____

28. $5 \times 10 =$ _____

48. $10 \div 10 =$ _____

9. $1 \times 10 =$ _____

29. $1 \times 10 =$ _____

49. $30 \div 10 =$ _____

10. $8 \times 10 =$ _____

30. $7 \times 10 =$ _____

50. $80 \div 10 =$ _____

11. $4 \times 10 =$ _____

31. $90 \div 10 =$ _____

51. $40 \div 10 =$ _____

12. $5 \times 10 =$ _____

32. $50 \div 10 =$ _____

52. $70 \div 10 =$ _____

13. $7 \times 10 =$ _____

33. $40 \div 10 =$ _____

53. $30 \div 10 =$ _____

14. $6 \times 10 =$ _____

34. $100 \div 10 =$ _____

54. $110 \div 10 =$ _____

15. $10 \times 10 =$ _____

35. $110 \div 10 =$ _____

55. $100 \div 10 =$ _____

16. $12 \times 10 =$ _____

36. $30 \div 10 =$ _____

56. $50 \div 10 =$ _____

17. $1 \times 10 =$ _____

37. $60 \div 10 =$ _____

57. $20 \div 10 =$ _____

18. $11 \times 10 =$ _____

38. $70 \div 10 =$ _____

58. $70 \div 10 =$ _____

19. $9 \times 10 =$ _____

39. $50 \div 10 =$ _____

59. $60 \div 10 =$ _____

20. $7 \times 10 =$ _____

40. $80 \div 10 =$ _____

60. $10 \div 10 =$ _____

SCORE:
(5 minute limit)

/60

TIME TAKEN (optional)

MINUTES SECONDS

