

NAME: _____

8 9



GROOVE

SCORE

BASELINE

CHECK 1

CHECK 2



BASELINE



Name: _____

Date: _____

- | | | | | | |
|-----|-----------------------|-----|-----------------------|-----|---------------------|
| 1. | $5 \times 8 =$ _____ | 21. | $8 \times 8 =$ _____ | 41. | $80 \div 8 =$ _____ |
| 2. | $7 \times 8 =$ _____ | 22. | $5 \times 8 =$ _____ | 42. | $88 \div 8 =$ _____ |
| 3. | $8 \times 8 =$ _____ | 23. | $3 \times 8 =$ _____ | 43. | $64 \div 8 =$ _____ |
| 4. | $4 \times 8 =$ _____ | 24. | $4 \times 8 =$ _____ | 44. | $40 \div 8 =$ _____ |
| 5. | $3 \times 8 =$ _____ | 25. | $6 \times 8 =$ _____ | 45. | $56 \div 8 =$ _____ |
| 6. | $9 \times 8 =$ _____ | 26. | $9 \times 8 =$ _____ | 46. | $48 \div 8 =$ _____ |
| 7. | $11 \times 8 =$ _____ | 27. | $10 \times 8 =$ _____ | 47. | $16 \div 8 =$ _____ |
| 8. | $12 \times 8 =$ _____ | 28. | $7 \times 8 =$ _____ | 48. | $8 \div 8 =$ _____ |
| 9. | $3 \times 8 =$ _____ | 29. | $2 \times 8 =$ _____ | 49. | $72 \div 8 =$ _____ |
| 10. | $1 \times 8 =$ _____ | 30. | $8 \times 8 =$ _____ | 50. | $88 \div 8 =$ _____ |
| 11. | $8 \times 8 =$ _____ | 31. | $16 \div 8 =$ _____ | 51. | $56 \div 8 =$ _____ |
| 12. | $6 \times 8 =$ _____ | 32. | $32 \div 8 =$ _____ | 52. | $32 \div 8 =$ _____ |
| 13. | $7 \times 8 =$ _____ | 33. | $40 \div 8 =$ _____ | 53. | $24 \div 8 =$ _____ |
| 14. | $9 \times 8 =$ _____ | 34. | $72 \div 8 =$ _____ | 54. | $64 \div 8 =$ _____ |
| 15. | $12 \times 8 =$ _____ | 35. | $80 \div 8 =$ _____ | 55. | $40 \div 8 =$ _____ |
| 16. | $11 \times 8 =$ _____ | 36. | $96 \div 8 =$ _____ | 56. | $96 \div 8 =$ _____ |
| 17. | $2 \times 8 =$ _____ | 37. | $56 \div 8 =$ _____ | 57. | $80 \div 8 =$ _____ |
| 18. | $1 \times 8 =$ _____ | 38. | $48 \div 8 =$ _____ | 58. | $48 \div 8 =$ _____ |
| 19. | $10 \times 8 =$ _____ | 39. | $24 \div 8 =$ _____ | 59. | $8 \div 8 =$ _____ |
| 20. | $9 \times 8 =$ _____ | 40. | $8 \div 8 =$ _____ | 60. | $16 \div 8 =$ _____ |

SCORE:
(5 minute limit)

/60

TIME TAKEN (optional)

<input type="text"/>	<input type="text"/>
MINUTES	SECONDS



Name: _____

Date: _____

MULTIPLICATION 1

Practise 8s

Complete first and then use it to help you if you get stuck.

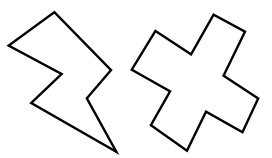
ROCK BOX

1.	$1 \times 8 =$	_____
2.	$2 \times 8 =$	_____
3.	$3 \times 8 =$	_____
4.	$4 \times 8 =$	_____
5.	$5 \times 8 =$	_____
6.	$6 \times 8 =$	_____
7.	$7 \times 8 =$	_____
8.	$8 \times 8 =$	_____
9.	$9 \times 8 =$	_____
10.	$10 \times 8 =$	_____
11.	$11 \times 8 =$	_____
12.	$12 \times 8 =$	_____


- | | | | | | |
|-----|-----------------|-------|-----|-----------------|-------|
| 21. | $11 \times 8 =$ | _____ | 41. | $9 \times 8 =$ | _____ |
| 22. | $4 \times 8 =$ | _____ | 42. | $5 \times 8 =$ | _____ |
| 23. | $10 \times 8 =$ | _____ | 43. | $3 \times 8 =$ | _____ |
| 24. | $8 \times 8 =$ | _____ | 44. | $2 \times 8 =$ | _____ |
| 25. | $9 \times 8 =$ | _____ | 45. | $12 \times 8 =$ | _____ |
| 26. | $1 \times 8 =$ | _____ | 46. | $7 \times 8 =$ | _____ |
| 27. | $3 \times 8 =$ | _____ | 47. | $11 \times 8 =$ | _____ |
| 28. | $12 \times 8 =$ | _____ | 48. | $1 \times 8 =$ | _____ |
| 29. | $4 \times 8 =$ | _____ | 49. | $5 \times 8 =$ | _____ |
| 30. | $9 \times 8 =$ | _____ | 50. | $7 \times 8 =$ | _____ |
| 31. | $8 \times 8 =$ | _____ | 51. | $8 \times 8 =$ | _____ |
| 32. | $7 \times 8 =$ | _____ | 52. | $11 \times 8 =$ | _____ |
| 33. | $11 \times 8 =$ | _____ | 53. | $10 \times 8 =$ | _____ |
| 34. | $7 \times 8 =$ | _____ | 54. | $6 \times 8 =$ | _____ |
| 35. | $1 \times 8 =$ | _____ | 55. | $9 \times 8 =$ | _____ |
| 36. | $12 \times 8 =$ | _____ | 56. | $4 \times 8 =$ | _____ |
| 37. | $2 \times 8 =$ | _____ | 57. | $3 \times 8 =$ | _____ |
| 38. | $5 \times 8 =$ | _____ | 58. | $6 \times 8 =$ | _____ |
| 39. | $4 \times 8 =$ | _____ | 59. | $9 \times 8 =$ | _____ |
| 40. | $6 \times 8 =$ | _____ | 60. | $11 \times 8 =$ | _____ |

Continue here...

- | | | |
|-----|-----------------|-------|
| 13. | $7 \times 8 =$ | _____ |
| 14. | $12 \times 8 =$ | _____ |
| 15. | $8 \times 8 =$ | _____ |
| 16. | $6 \times 8 =$ | _____ |
| 17. | $10 \times 8 =$ | _____ |
| 18. | $9 \times 8 =$ | _____ |
| 19. | $11 \times 8 =$ | _____ |
| 20. | $3 \times 8 =$ | _____ |



SCORE: _____



Grown-ups:
Can learners spot links between neighbouring questions?



Name: _____

Date: _____

MULTIPLICATION 2

Practise 8s

Complete first and then use it to help you if you get stuck.

ROCK BOX

1. $1 \times 8 =$ _____

2. $2 \times 8 =$ _____

3. $3 \times 8 =$ _____

4. $4 \times 8 =$ _____

5. $5 \times 8 =$ _____

6. $6 \times 8 =$ _____

7. $7 \times 8 =$ _____

8. $8 \times 8 =$ _____

9. $9 \times 8 =$ _____

10. $10 \times 8 =$ _____

11. $11 \times 8 =$ _____

12. $12 \times 8 =$ _____

13. $8 \times 1 =$ _____

14. $8 \times 2 =$ _____

15. $8 \times 3 =$ _____

16. $8 \times 4 =$ _____

17. $8 \times 5 =$ _____

18. $8 \times 6 =$ _____

19. $8 \times 7 =$ _____

20. $8 \times 8 =$ _____

21. $8 \times 9 =$ _____

22. $8 \times 10 =$ _____

23. $8 \times 11 =$ _____

24. $8 \times 12 =$ _____

41. $8 \times 3 =$ _____

42. $5 \times 8 =$ _____

43. $8 \times 8 =$ _____

44. $7 \times 8 =$ _____

45. $8 \times 8 =$ _____

46. $8 \times 12 =$ _____

47. $4 \times 8 =$ _____

48. $8 \times 2 =$ _____

49. $1 \times 8 =$ _____

50. $8 \times 5 =$ _____

51. $8 \times 11 =$ _____

52. $8 \times 1 =$ _____

53. $8 \times 12 =$ _____

54. $8 \times 7 =$ _____

55. $8 \times 9 =$ _____

56. $8 \times 6 =$ _____

57. $8 \times 5 =$ _____

58. $8 \times 10 =$ _____

59. $8 \times 3 =$ _____

60. $6 \times 8 =$ _____

Continue here...

25. $8 \times 4 =$ _____

26. $1 \times 8 =$ _____

27. $8 \times 5 =$ _____

28. $6 \times 8 =$ _____

29. $8 \times 6 =$ _____

30. $5 \times 8 =$ _____

31. $8 \times 7 =$ _____

32. $4 \times 8 =$ _____

33. $8 \times 7 =$ _____

34. $8 \times 8 =$ _____

35. $9 \times 8 =$ _____

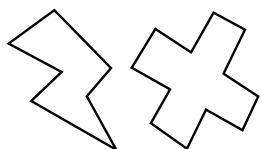
36. $8 \times 11 =$ _____

37. $12 \times 8 =$ _____

38. $9 \times 8 =$ _____

39. $2 \times 8 =$ _____

40. $8 \times 1 =$ _____



SCORE:

Grown-ups:
Can learners spot links between neighbouring questions?



Name: _____

Date: _____

MISSING NUMBER 1

Practise 8s

Complete first and then use it to help you if you get stuck.

ROCK BOX

1. _____ × 8 = 8

2. _____ × 8 = 16

3. _____ × 8 = 24

4. _____ × 8 = 32

5. _____ × 8 = 40

6. _____ × 8 = 48

7. _____ × 8 = 56

8. _____ × 8 = 64

9. _____ × 8 = 72

10. _____ × 8 = 80

11. _____ × 8 = 88

12. _____ × 8 = 96

21. _____ × 8 = 40

22. _____ × 8 = 16

23. _____ × 8 = 48

24. _____ × 8 = 96

25. _____ × 8 = 80

26. _____ × 8 = 72

27. _____ × 8 = 88

28. _____ × 8 = 56

29. _____ × 8 = 32

30. _____ × 8 = 24

31. _____ × 8 = 8

32. _____ × 8 = 88

33. _____ × 8 = 64

34. _____ × 8 = 40

35. _____ × 8 = 8

36. _____ × 8 = 32

37. _____ × 8 = 48

38. _____ × 8 = 56

39. _____ × 8 = 72

40. _____ × 8 = 96

41. _____ × 8 = 16

42. _____ × 8 = 24

42. _____ × 8 = 8

44. _____ × 8 = 40

45. _____ × 8 = 56

46. _____ × 8 = 32

47. _____ × 8 = 64

48. _____ × 8 = 96

49. _____ × 8 = 80

50. _____ × 8 = 72

51. _____ × 8 = 48

52. _____ × 8 = 24

53. _____ × 8 = 88

54. _____ × 8 = 64

55. _____ × 8 = 16

56. _____ × 8 = 56

57. _____ × 8 = 40

58. _____ × 8 = 64

59. _____ × 8 = 72

60. _____ × 8 = 80

Continue here...

13. _____ × 8 = 32

14. _____ × 8 = 8

15. _____ × 8 = 80

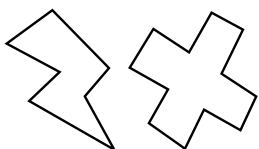
16. _____ × 8 = 72

17. _____ × 8 = 96

18. _____ × 8 = 88

19. _____ × 8 = 64

20. _____ × 8 = 56



SCORE:

Grown-ups:
Can learners spot links between neighbouring questions?



Name: _____

Date: _____

MISSING NUMBER 2

Practise 8s

Complete first and then use it to help you if you get stuck.

ROCK BOX			
1.	$\times 8 = 8$	2.	$\times 1 = 8$
3.	$\times 8 = 16$	4.	$\times 2 = 16$
5.	$\times 8 = 24$	6.	$\times 3 = 24$
7.	$\times 8 = 32$	8.	$\times 4 = 32$
9.	$\times 8 = 40$	10.	$\times 5 = 40$
11.	$\times 8 = 48$	12.	$\times 6 = 48$
13.	$\times 8 = 56$	14.	$\times 7 = 56$
15.	$\times 8 = 64$	16.	$\times 8 = 64$
17.	$\times 8 = 72$	18.	$\times 9 = 72$
19.	$\times 8 = 80$	20.	$\times 10 = 80$
21.	$\times 8 = 88$	22.	$\times 11 = 88$
23.	$\times 8 = 96$	24.	$\times 12 = 96$

Continue here...

25. _____ $\times 8 = 72$

33. _____ $\times 1 = 8$

26. _____ $\times 9 = 72$

34. _____ $\times 11 = 88$

27. _____ $\times 8 = 48$

35. _____ $\times 9 = 72$

28. _____ $\times 7 = 56$

36. _____ $\times 8 = 96$

29. _____ $\times 8 = 64$

37. _____ $\times 8 = 56$

30. _____ $\times 8 = 88$

38. _____ $\times 5 = 40$

31. _____ $\times 12 = 96$

39. _____ $\times 8 = 48$

32. _____ $\times 8 = 8$

40. _____ $\times 3 = 24$

41. _____ $\times 4 = 32$

42. _____ $\times 8 = 16$

43. _____ $\times 8 = 64$

44. _____ $\times 12 = 96$

45. _____ $\times 6 = 48$

46. _____ $\times 7 = 56$

47. _____ $\times 8 = 72$

48. _____ $\times 11 = 88$

49. _____ $\times 8 = 80$

50. _____ $\times 8 = 8$

51. _____ $\times 8 = 96$

52. _____ $\times 8 = 24$

53. _____ $\times 8 = 32$

54. _____ $\times 8 = 40$

55. _____ $\times 8 = 80$

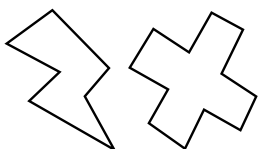
56. _____ $\times 2 = 16$

57. _____ $\times 8 = 64$

58. _____ $\times 1 = 8$

59. _____ $\times 9 = 72$

60. _____ $\times 12 = 96$



SCORE:

Grown-ups:
Can learners spot links between neighbouring questions?



Name: _____

Date: _____

DIVISION 1

Practise 8s

Complete first and then use it to help you if you get stuck.

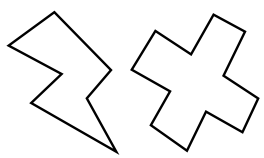
ROCK BOX

1.	$8 \div 8 =$	_____
2.	$16 \div 8 =$	_____
3.	$24 \div 8 =$	_____
4.	$32 \div 8 =$	_____
5.	$40 \div 8 =$	_____
6.	$48 \div 8 =$	_____
7.	$56 \div 8 =$	_____
8.	$64 \div 8 =$	_____
9.	$72 \div 8 =$	_____
10.	$80 \div 8 =$	_____
11.	$88 \div 8 =$	_____
12.	$96 \div 8 =$	_____

- | | | | | | |
|-----|---------------|-------|-----|---------------|-------|
| 21. | $88 \div 8 =$ | _____ | 41. | $72 \div 8 =$ | _____ |
| 22. | $72 \div 8 =$ | _____ | 42. | $64 \div 8 =$ | _____ |
| 23. | $40 \div 8 =$ | _____ | 43. | $16 \div 8 =$ | _____ |
| 24. | $32 \div 8 =$ | _____ | 44. | $48 \div 8 =$ | _____ |
| 25. | $24 \div 8 =$ | _____ | 45. | $56 \div 8 =$ | _____ |
| 26. | $48 \div 8 =$ | _____ | 46. | $48 \div 8 =$ | _____ |
| 27. | $96 \div 8 =$ | _____ | 47. | $40 \div 8 =$ | _____ |
| 28. | $64 \div 8 =$ | _____ | 48. | $64 \div 8 =$ | _____ |
| 29. | $32 \div 8 =$ | _____ | 49. | $16 \div 8 =$ | _____ |
| 30. | $80 \div 8 =$ | _____ | 50. | $8 \div 8 =$ | _____ |
| 31. | $88 \div 8 =$ | _____ | 51. | $32 \div 8 =$ | _____ |
| 32. | $72 \div 8 =$ | _____ | 52. | $72 \div 8 =$ | _____ |
| 33. | $56 \div 8 =$ | _____ | 53. | $24 \div 8 =$ | _____ |
| 34. | $8 \div 8 =$ | _____ | 54. | $64 \div 8 =$ | _____ |
| 35. | $40 \div 8 =$ | _____ | 55. | $88 \div 8 =$ | _____ |
| 36. | $64 \div 8 =$ | _____ | 56. | $80 \div 8 =$ | _____ |
| 37. | $96 \div 8 =$ | _____ | 57. | $96 \div 8 =$ | _____ |
| 38. | $24 \div 8 =$ | _____ | 58. | $56 \div 8 =$ | _____ |
| 39. | $8 \div 8 =$ | _____ | 59. | $40 \div 8 =$ | _____ |
| 40. | $48 \div 8 =$ | _____ | 60. | $48 \div 8 =$ | _____ |

Continue here...

- | | | |
|-----|---------------|-------|
| 13. | $96 \div 8 =$ | _____ |
| 14. | $64 \div 8 =$ | _____ |
| 15. | $80 \div 8 =$ | _____ |
| 16. | $48 \div 8 =$ | _____ |
| 17. | $88 \div 8 =$ | _____ |
| 18. | $8 \div 8 =$ | _____ |
| 19. | $24 \div 8 =$ | _____ |
| 20. | $56 \div 8 =$ | _____ |



SCORE:

Grown-ups:
Can learners spot links between neighbouring questions?



Name: _____

Date: _____

DIVISION 2

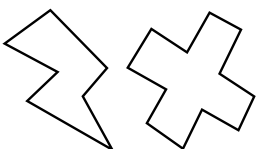
Practise 8s

Complete first and then use it to help you if you get stuck.

ROCK BOX	
1. $8 \div 8 =$	2. $8 \div 1 =$
3. $16 \div 8 =$	4. $16 \div 2 =$
5. $24 \div 8 =$	6. $24 \div 3 =$
7. $32 \div 8 =$	8. $32 \div 4 =$
9. $40 \div 8 =$	10. $40 \div 5 =$
11. $48 \div 8 =$	12. $48 \div 6 =$
13. $56 \div 8 =$	14. $56 \div 7 =$
15. $64 \div 8 =$	16. $64 \div 8 =$
17. $72 \div 8 =$	18. $72 \div 9 =$
19. $80 \div 8 =$	20. $80 \div 10 =$
21. $88 \div 8 =$	22. $88 \div 11 =$
23. $96 \div 8 =$	24. $96 \div 12 =$

Continue here...

- | | | |
|-------------------------|--------------------------|--------------------------|
| 25. $40 \div 5 =$ _____ | 33. $48 \div 6 =$ _____ | 41. $64 \div 8 =$ _____ |
| 26. $24 \div 8 =$ _____ | 34. $40 \div 8 =$ _____ | 42. $48 \div 6 =$ _____ |
| 27. $40 \div 8 =$ _____ | 35. $48 \div 8 =$ _____ | 43. $40 \div 8 =$ _____ |
| 28. $80 \div 8 =$ _____ | 36. $72 \div 9 =$ _____ | 44. $96 \div 12 =$ _____ |
| 29. $24 \div 3 =$ _____ | 37. $88 \div 11 =$ _____ | 45. $80 \div 8 =$ _____ |
| 30. $8 \div 8 =$ _____ | 38. $72 \div 8 =$ _____ | 46. $24 \div 8 =$ _____ |
| 31. $8 \div 1 =$ _____ | 39. $32 \div 8 =$ _____ | 47. $56 \div 8 =$ _____ |
| 32. $16 \div 8 =$ _____ | 40. $56 \div 7 =$ _____ | 48. $8 \div 1 =$ _____ |
| | | 49. $88 \div 8 =$ _____ |
| | | 50. $32 \div 4 =$ _____ |
| | | 51. $32 \div 8 =$ _____ |
| | | 52. $64 \div 8 =$ _____ |
| | | 53. $72 \div 9 =$ _____ |
| | | 54. $64 \div 8 =$ _____ |
| | | 55. $80 \div 8 =$ _____ |
| | | 56. $48 \div 8 =$ _____ |
| | | 57. $16 \div 2 =$ _____ |
| | | 58. $24 \div 3 =$ _____ |
| | | 59. $56 \div 8 =$ _____ |
| | | 60. $40 \div 5 =$ _____ |



SCORE:

Grown-ups:
Can learners spot links between neighbouring questions?





CHECK 1



Name: _____

Date: _____

- | | | | | | |
|-----|-----------------------|-----|-----------------------|-----|---------------------|
| 1. | $8 \times 8 =$ _____ | 21. | $8 \times 8 =$ _____ | 41. | $16 \div 8 =$ _____ |
| 2. | $6 \times 8 =$ _____ | 22. | $10 \times 8 =$ _____ | 42. | $80 \div 8 =$ _____ |
| 3. | $5 \times 8 =$ _____ | 23. | $12 \times 8 =$ _____ | 43. | $64 \div 8 =$ _____ |
| 4. | $4 \times 8 =$ _____ | 24. | $9 \times 8 =$ _____ | 44. | $8 \div 8 =$ _____ |
| 5. | $3 \times 8 =$ _____ | 25. | $7 \times 8 =$ _____ | 45. | $40 \div 8 =$ _____ |
| 6. | $6 \times 8 =$ _____ | 26. | $9 \times 8 =$ _____ | 46. | $72 \div 8 =$ _____ |
| 7. | $7 \times 8 =$ _____ | 27. | $5 \times 8 =$ _____ | 47. | $56 \div 8 =$ _____ |
| 8. | $10 \times 8 =$ _____ | 28. | $4 \times 8 =$ _____ | 48. | $8 \div 8 =$ _____ |
| 9. | $12 \times 8 =$ _____ | 29. | $3 \times 8 =$ _____ | 49. | $80 \div 8 =$ _____ |
| 10. | $1 \times 8 =$ _____ | 30. | $6 \times 8 =$ _____ | 50. | $96 \div 8 =$ _____ |
| 11. | $9 \times 8 =$ _____ | 31. | $24 \div 8 =$ _____ | 51. | $32 \div 8 =$ _____ |
| 12. | $2 \times 8 =$ _____ | 32. | $48 \div 8 =$ _____ | 52. | $48 \div 8 =$ _____ |
| 13. | $11 \times 8 =$ _____ | 33. | $72 \div 8 =$ _____ | 53. | $40 \div 8 =$ _____ |
| 14. | $7 \times 8 =$ _____ | 34. | $40 \div 8 =$ _____ | 54. | $24 \div 8 =$ _____ |
| 15. | $9 \times 8 =$ _____ | 35. | $64 \div 8 =$ _____ | 55. | $80 \div 8 =$ _____ |
| 16. | $4 \times 8 =$ _____ | 36. | $8 \div 8 =$ _____ | 56. | $88 \div 8 =$ _____ |
| 17. | $3 \times 8 =$ _____ | 37. | $88 \div 8 =$ _____ | 57. | $72 \div 8 =$ _____ |
| 18. | $6 \times 8 =$ _____ | 38. | $96 \div 8 =$ _____ | 58. | $56 \div 8 =$ _____ |
| 19. | $1 \times 8 =$ _____ | 39. | $64 \div 8 =$ _____ | 59. | $16 \div 8 =$ _____ |
| 20. | $5 \times 8 =$ _____ | 40. | $32 \div 8 =$ _____ | 60. | $32 \div 8 =$ _____ |

SCORE:
(5 minute limit)

/60

TIME TAKEN (optional)

--	--

MINUTES SECONDS



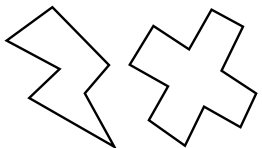
Name: _____

Date: _____

MULTIPLICATION 3

Practise 8s

- | | | | | | |
|-----|-----------------------|-----|-----------------------|-----|-----------------------|
| 1. | $8 \times 5 =$ _____ | 21. | $10 \times 8 =$ _____ | 41. | $9 \times 8 =$ _____ |
| 2. | $8 \times 3 =$ _____ | 22. | $8 \times 1 =$ _____ | 42. | $8 \times 12 =$ _____ |
| 3. | $3 \times 8 =$ _____ | 23. | $8 \times 2 =$ _____ | 43. | $11 \times 8 =$ _____ |
| 4. | $8 \times 7 =$ _____ | 24. | $4 \times 8 =$ _____ | 44. | $8 \times 7 =$ _____ |
| 5. | $8 \times 4 =$ _____ | 25. | $8 \times 6 =$ _____ | 45. | $8 \times 1 =$ _____ |
| 6. | $7 \times 8 =$ _____ | 26. | $9 \times 8 =$ _____ | 46. | $8 \times 3 =$ _____ |
| 7. | $5 \times 8 =$ _____ | 27. | $8 \times 12 =$ _____ | 47. | $12 \times 8 =$ _____ |
| 8. | $8 \times 8 =$ _____ | 28. | $11 \times 8 =$ _____ | 48. | $9 \times 8 =$ _____ |
| 9. | $9 \times 8 =$ _____ | 29. | $8 \times 1 =$ _____ | 49. | $8 \times 6 =$ _____ |
| 10. | $8 \times 11 =$ _____ | 30. | $7 \times 8 =$ _____ | 50. | $3 \times 8 =$ _____ |
| 11. | $12 \times 8 =$ _____ | 31. | $8 \times 11 =$ _____ | 51. | $5 \times 8 =$ _____ |
| 12. | $8 \times 12 =$ _____ | 32. | $8 \times 5 =$ _____ | 52. | $10 \times 8 =$ _____ |
| 13. | $8 \times 8 =$ _____ | 33. | $8 \times 3 =$ _____ | 53. | $8 \times 5 =$ _____ |
| 14. | $8 \times 10 =$ _____ | 34. | $8 \times 2 =$ _____ | 54. | $8 \times 8 =$ _____ |
| 15. | $8 \times 7 =$ _____ | 35. | $7 \times 8 =$ _____ | 55. | $8 \times 2 =$ _____ |
| 16. | $6 \times 8 =$ _____ | 36. | $8 \times 4 =$ _____ | 56. | $8 \times 4 =$ _____ |
| 17. | $3 \times 8 =$ _____ | 37. | $8 \times 3 =$ _____ | 57. | $7 \times 8 =$ _____ |
| 18. | $1 \times 8 =$ _____ | 38. | $2 \times 8 =$ _____ | 58. | $9 \times 8 =$ _____ |
| 19. | $4 \times 8 =$ _____ | 39. | $9 \times 8 =$ _____ | 59. | $8 \times 8 =$ _____ |
| 20. | $8 \times 8 =$ _____ | 40. | $8 \times 8 =$ _____ | 60. | $6 \times 8 =$ _____ |



SCORE:

Grown-ups:
Can learners spot links between neighbouring questions?



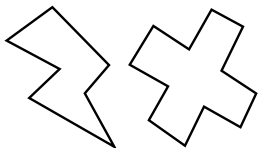
Name: _____

MISSING NUMBERS 3

Practise 8s

Date: _____

- | | | |
|--------------------|---------------------|---------------------|
| 1. _____ × 8 = 88 | 21. _____ × 8 = 32 | 41. _____ × 8 = 8 |
| 2. _____ × 8 = 96 | 22. _____ × 12 = 96 | 42. _____ × 11 = 88 |
| 3. _____ × 7 = 56 | 23. _____ × 8 = 64 | 43. _____ × 8 = 64 |
| 4. _____ × 8 = 40 | 24. _____ × 7 = 56 | 44. _____ × 9 = 72 |
| 5. _____ × 9 = 72 | 25. _____ × 5 = 40 | 45. _____ × 8 = 72 |
| 6. _____ × 6 = 48 | 26. _____ × 6 = 48 | 46. _____ × 8 = 80 |
| 7. _____ × 8 = 48 | 27. _____ × 8 = 16 | 47. _____ × 8 = 32 |
| 8. _____ × 4 = 32 | 28. _____ × 1 = 8 | 48. _____ × 2 = 16 |
| 9. _____ × 9 = 72 | 29. _____ × 8 = 80 | 49. _____ × 1 = 8 |
| 10. _____ × 3 = 24 | 30. _____ × 8 = 88 | 50. _____ × 8 = 64 |
| 11. _____ × 8 = 16 | 31. _____ × 9 = 72 | 51. _____ × 6 = 48 |
| 12. _____ × 1 = 8 | 32. _____ × 4 = 32 | 52. _____ × 4 = 32 |
| 13. _____ × 8 = 8 | 33. _____ × 8 = 24 | 53. _____ × 8 = 40 |
| 14. _____ × 8 = 80 | 34. _____ × 8 = 80 | 54. _____ × 8 = 56 |
| 15. _____ × 8 = 88 | 35. _____ × 8 = 24 | 55. _____ × 9 = 72 |
| 16. _____ × 7 = 56 | 36. _____ × 5 = 40 | 56. _____ × 8 = 88 |
| 17. _____ × 5 = 40 | 37. _____ × 8 = 72 | 57. _____ × 12 = 96 |
| 18. _____ × 8 = 64 | 38. _____ × 4 = 32 | 58. _____ × 8 = 96 |
| 19. _____ × 8 = 32 | 39. _____ × 8 = 8 | 59. _____ × 8 = 56 |
| 20. _____ × 8 = 56 | 40. _____ × 6 = 48 | 60. _____ × 9 = 72 |



SCORE:

Grown-ups:
Can learners spot links between neighbouring questions?



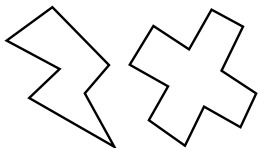
Name: _____

Date: _____

DIVISION 3

Practise 8s

- | | | | | | |
|-----|----------------------|-----|----------------------|-----|----------------------|
| 1. | $56 \div 7 =$ _____ | 21. | $96 \div 8 =$ _____ | 41. | $88 \div 11 =$ _____ |
| 2. | $56 \div 8 =$ _____ | 22. | $48 \div 8 =$ _____ | 42. | $72 \div 8 =$ _____ |
| 3. | $24 \div 3 =$ _____ | 23. | $72 \div 8 =$ _____ | 43. | $56 \div 7 =$ _____ |
| 4. | $16 \div 2 =$ _____ | 24. | $56 \div 7 =$ _____ | 44. | $88 \div 11 =$ _____ |
| 5. | $72 \div 8 =$ _____ | 25. | $24 \div 8 =$ _____ | 45. | $88 \div 8 =$ _____ |
| 6. | $32 \div 4 =$ _____ | 26. | $80 \div 8 =$ _____ | 46. | $8 \div 1 =$ _____ |
| 7. | $80 \div 8 =$ _____ | 27. | $40 \div 5 =$ _____ | 47. | $80 \div 8 =$ _____ |
| 8. | $88 \div 11 =$ _____ | 28. | $56 \div 8 =$ _____ | 48. | $72 \div 9 =$ _____ |
| 9. | $88 \div 8 =$ _____ | 29. | $32 \div 4 =$ _____ | 49. | $64 \div 8 =$ _____ |
| 10. | $56 \div 8 =$ _____ | 30. | $48 \div 8 =$ _____ | 50. | $32 \div 8 =$ _____ |
| 11. | $40 \div 5 =$ _____ | 31. | $32 \div 8 =$ _____ | 51. | $32 \div 4 =$ _____ |
| 12. | $96 \div 12 =$ _____ | 32. | $24 \div 3 =$ _____ | 52. | $48 \div 8 =$ _____ |
| 13. | $96 \div 8 =$ _____ | 33. | $72 \div 9 =$ _____ | 53. | $24 \div 8 =$ _____ |
| 14. | $64 \div 8 =$ _____ | 34. | $80 \div 8 =$ _____ | 54. | $56 \div 8 =$ _____ |
| 15. | $88 \div 8 =$ _____ | 35. | $88 \div 8 =$ _____ | 55. | $24 \div 3 =$ _____ |
| 16. | $40 \div 8 =$ _____ | 36. | $56 \div 8 =$ _____ | 56. | $96 \div 8 =$ _____ |
| 17. | $48 \div 6 =$ _____ | 37. | $96 \div 12 =$ _____ | 57. | $48 \div 8 =$ _____ |
| 18. | $24 \div 8 =$ _____ | 38. | $8 \div 1 =$ _____ | 58. | $40 \div 8 =$ _____ |
| 19. | $24 \div 3 =$ _____ | 39. | $8 \div 8 =$ _____ | 59. | $16 \div 2 =$ _____ |
| 20. | $72 \div 9 =$ _____ | 40. | $64 \div 8 =$ _____ | 60. | $16 \div 8 =$ _____ |



SCORE:

Grown-ups:
Can learners spot links
between neighbouring
questions?



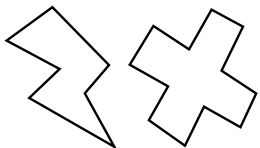
Name: _____

Date: _____


MULTIPLICATION 4

Practise 8s

- | | | | | | |
|-----|-----------------------|-----|-----------------------|-----|-----------------------|
| 1. | $12 \times 8 =$ _____ | 21. | $1 \times 8 =$ _____ | 41. | $8 \times 3 =$ _____ |
| 2. | $11 \times 8 =$ _____ | 22. | $8 \times 4 =$ _____ | 42. | $8 \times 2 =$ _____ |
| 3. | $8 \times 8 =$ _____ | 23. | $4 \times 8 =$ _____ | 43. | $8 \times 8 =$ _____ |
| 4. | $9 \times 8 =$ _____ | 24. | $8 \times 3 =$ _____ | 44. | $8 \times 4 =$ _____ |
| 5. | $8 \times 7 =$ _____ | 25. | $8 \times 6 =$ _____ | 45. | $8 \times 2 =$ _____ |
| 6. | $8 \times 5 =$ _____ | 26. | $9 \times 8 =$ _____ | 46. | $1 \times 8 =$ _____ |
| 7. | $6 \times 8 =$ _____ | 27. | $8 \times 8 =$ _____ | 47. | $11 \times 8 =$ _____ |
| 8. | $8 \times 4 =$ _____ | 28. | $8 \times 10 =$ _____ | 48. | $12 \times 8 =$ _____ |
| 9. | $3 \times 8 =$ _____ | 29. | $11 \times 8 =$ _____ | 49. | $8 \times 7 =$ _____ |
| 10. | $8 \times 3 =$ _____ | 30. | $8 \times 6 =$ _____ | 50. | $10 \times 8 =$ _____ |
| 11. | $6 \times 8 =$ _____ | 31. | $6 \times 8 =$ _____ | 51. | $4 \times 8 =$ _____ |
| 12. | $7 \times 8 =$ _____ | 32. | $9 \times 8 =$ _____ | 52. | $8 \times 9 =$ _____ |
| 13. | $10 \times 8 =$ _____ | 33. | $3 \times 8 =$ _____ | 53. | $6 \times 8 =$ _____ |
| 14. | $8 \times 12 =$ _____ | 34. | $5 \times 8 =$ _____ | 54. | $8 \times 8 =$ _____ |
| 15. | $11 \times 8 =$ _____ | 35. | $8 \times 8 =$ _____ | 55. | $4 \times 8 =$ _____ |
| 16. | $6 \times 8 =$ _____ | 36. | $8 \times 11 =$ _____ | 56. | $11 \times 8 =$ _____ |
| 17. | $8 \times 8 =$ _____ | 37. | $8 \times 10 =$ _____ | 57. | $8 \times 3 =$ _____ |
| 18. | $8 \times 3 =$ _____ | 38. | $1 \times 8 =$ _____ | 58. | $8 \times 10 =$ _____ |
| 19. | $2 \times 8 =$ _____ | 39. | $2 \times 8 =$ _____ | 59. | $8 \times 6 =$ _____ |
| 20. | $8 \times 1 =$ _____ | 40. | $8 \times 5 =$ _____ | 60. | $9 \times 8 =$ _____ |



SCORE:



Grown-ups:
Can learners spot links between neighbouring questions?



Name: _____

MISSING NUMBERS 4

Practise 8s

Date: _____

1. _____ \times 8 = 48

21. _____ \times 8 = 40

41. _____ \times 8 = 48

2. _____ \times 9 = 72

22. _____ \times 8 = 32

42. _____ \times 5 = 40

3. _____ \times 8 = 64

23. _____ \times 3 = 24

43. _____ \times 8 = 80

4. _____ \times 4 = 32

24. _____ \times 6 = 48

44. _____ \times 8 = 8

5. _____ \times 8 = 24

25. _____ \times 8 = 56

45. _____ \times 9 = 72

6. _____ \times 8 = 40

26. _____ \times 8 = 40

46. _____ \times 8 = 88

7. _____ \times 6 = 48

27. _____ \times 8 = 72

47. _____ \times 7 = 56

8. _____ \times 8 = 8

28. _____ \times 8 = 64

48. _____ \times 3 = 24

9. _____ \times 8 = 16

29. _____ \times 8 = 8

49. _____ \times 2 = 16

10. _____ \times 8 = 80

30. _____ \times 12 = 96

50. _____ \times 8 = 32

11. _____ \times 12 = 96

31. _____ \times 8 = 24

51. _____ \times 5 = 40

12. _____ \times 8 = 48

32. _____ \times 2 = 16

52. _____ \times 8 = 48

13. _____ \times 8 = 56

33. _____ \times 6 = 48

53. _____ \times 8 = 80

14. _____ \times 1 = 8

34. _____ \times 8 = 16

54. _____ \times 12 = 96

15. _____ \times 8 = 16

35. _____ \times 8 = 8

55. _____ \times 1 = 8

16. _____ \times 8 = 88

36. _____ \times 12 = 96

56. _____ \times 8 = 80

17. _____ \times 9 = 72

37. _____ \times 9 = 72

57. _____ \times 9 = 72

18. _____ \times 8 = 80

38. _____ \times 8 = 32

58. _____ \times 8 = 32

19. _____ \times 6 = 48

39. _____ \times 8 = 24

59. _____ \times 8 = 56

20. _____ \times 8 = 56

40. _____ \times 8 = 64

60. _____ \times 7 = 56



SCORE:

Grown-ups:
Can learners spot links between neighbouring questions?



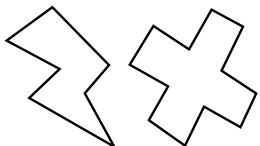
Name: _____

Date: _____

DIVISION 4

Practise 8s

- | | | | | | |
|-----|----------------------|-----|----------------------|-----|----------------------|
| 1. | $96 \div 8 =$ _____ | 21. | $80 \div 8 =$ _____ | 41. | $96 \div 8 =$ _____ |
| 2. | $48 \div 8 =$ _____ | 22. | $96 \div 8 =$ _____ | 42. | $8 \div 1 =$ _____ |
| 3. | $8 \div 1 =$ _____ | 23. | $88 \div 11 =$ _____ | 43. | $8 \div 8 =$ _____ |
| 4. | $8 \div 8 =$ _____ | 24. | $56 \div 8 =$ _____ | 44. | $32 \div 8 =$ _____ |
| 5. | $72 \div 9 =$ _____ | 25. | $56 \div 7 =$ _____ | 45. | $56 \div 7 =$ _____ |
| 6. | $64 \div 8 =$ _____ | 26. | $32 \div 8 =$ _____ | 46. | $56 \div 8 =$ _____ |
| 7. | $40 \div 8 =$ _____ | 27. | $40 \div 8 =$ _____ | 47. | $72 \div 9 =$ _____ |
| 8. | $48 \div 6 =$ _____ | 28. | $72 \div 8 =$ _____ | 48. | $80 \div 8 =$ _____ |
| 9. | $56 \div 7 =$ _____ | 29. | $72 \div 9 =$ _____ | 49. | $88 \div 8 =$ _____ |
| 10. | $80 \div 8 =$ _____ | 30. | $64 \div 8 =$ _____ | 50. | $16 \div 8 =$ _____ |
| 11. | $24 \div 3 =$ _____ | 31. | $48 \div 8 =$ _____ | 51. | $88 \div 11 =$ _____ |
| 12. | $16 \div 2 =$ _____ | 32. | $32 \div 4 =$ _____ | 52. | $24 \div 8 =$ _____ |
| 13. | $40 \div 8 =$ _____ | 33. | $8 \div 8 =$ _____ | 53. | $96 \div 12 =$ _____ |
| 14. | $48 \div 8 =$ _____ | 34. | $40 \div 5 =$ _____ | 54. | $32 \div 8 =$ _____ |
| 15. | $72 \div 8 =$ _____ | 35. | $56 \div 7 =$ _____ | 55. | $56 \div 8 =$ _____ |
| 16. | $32 \div 8 =$ _____ | 36. | $16 \div 8 =$ _____ | 56. | $48 \div 6 =$ _____ |
| 17. | $32 \div 4 =$ _____ | 37. | $72 \div 9 =$ _____ | 57. | $8 \div 8 =$ _____ |
| 18. | $64 \div 8 =$ _____ | 38. | $24 \div 8 =$ _____ | 58. | $16 \div 2 =$ _____ |
| 19. | $8 \div 8 =$ _____ | 39. | $88 \div 11 =$ _____ | 59. | $80 \div 8 =$ _____ |
| 20. | $96 \div 12 =$ _____ | 40. | $48 \div 6 =$ _____ | 60. | $8 \div 1 =$ _____ |



SCORE:

Grown-ups:
Can learners spot links between neighbouring questions?





CHECK 2



Name: _____

Date: _____

- | | | | | | |
|-----|-----------------------|-----|-----------------------|-----|---------------------|
| 1. | $9 \times 8 =$ _____ | 21. | $3 \times 8 =$ _____ | 41. | $8 \div 8 =$ _____ |
| 2. | $4 \times 8 =$ _____ | 22. | $8 \times 8 =$ _____ | 42. | $72 \div 8 =$ _____ |
| 3. | $12 \times 8 =$ _____ | 23. | $2 \times 8 =$ _____ | 43. | $56 \div 8 =$ _____ |
| 4. | $3 \times 8 =$ _____ | 24. | $4 \times 8 =$ _____ | 44. | $88 \div 8 =$ _____ |
| 5. | $6 \times 8 =$ _____ | 25. | $8 \times 8 =$ _____ | 45. | $16 \div 8 =$ _____ |
| 6. | $10 \times 8 =$ _____ | 26. | $6 \times 8 =$ _____ | 46. | $56 \div 8 =$ _____ |
| 7. | $12 \times 8 =$ _____ | 27. | $12 \times 8 =$ _____ | 47. | $96 \div 8 =$ _____ |
| 8. | $2 \times 8 =$ _____ | 28. | $5 \times 8 =$ _____ | 48. | $8 \div 8 =$ _____ |
| 9. | $6 \times 8 =$ _____ | 29. | $1 \times 8 =$ _____ | 49. | $24 \div 8 =$ _____ |
| 10. | $8 \times 8 =$ _____ | 30. | $7 \times 8 =$ _____ | 50. | $64 \div 8 =$ _____ |
| 11. | $4 \times 8 =$ _____ | 31. | $72 \div 8 =$ _____ | 51. | $32 \div 8 =$ _____ |
| 12. | $5 \times 8 =$ _____ | 32. | $40 \div 8 =$ _____ | 52. | $56 \div 8 =$ _____ |
| 13. | $7 \times 8 =$ _____ | 33. | $32 \div 8 =$ _____ | 53. | $24 \div 8 =$ _____ |
| 14. | $6 \times 8 =$ _____ | 34. | $80 \div 8 =$ _____ | 54. | $88 \div 8 =$ _____ |
| 15. | $10 \times 8 =$ _____ | 35. | $88 \div 8 =$ _____ | 55. | $80 \div 8 =$ _____ |
| 16. | $12 \times 8 =$ _____ | 36. | $24 \div 8 =$ _____ | 56. | $40 \div 8 =$ _____ |
| 17. | $1 \times 8 =$ _____ | 37. | $48 \div 8 =$ _____ | 57. | $16 \div 8 =$ _____ |
| 18. | $11 \times 8 =$ _____ | 38. | $56 \div 8 =$ _____ | 58. | $56 \div 8 =$ _____ |
| 19. | $9 \times 8 =$ _____ | 39. | $40 \div 8 =$ _____ | 59. | $48 \div 8 =$ _____ |
| 20. | $7 \times 8 =$ _____ | 40. | $64 \div 8 =$ _____ | 60. | $8 \div 8 =$ _____ |

SCORE:
(5 minute limit)

/60

TIME TAKEN (optional)

<input type="text"/>	<input type="text"/>
MINUTES	SECONDS

