


NAME: _____

33



SCORE

BASELINE

CHECK 1

CHECK 2



BASELINE



Name: _____

Date: _____

- | | | | | | |
|-----|-----------------------|-----|-----------------------|-----|---------------------|
| 1. | $5 \times 3 =$ _____ | 21. | $8 \times 3 =$ _____ | 41. | $30 \div 3 =$ _____ |
| 2. | $7 \times 3 =$ _____ | 22. | $5 \times 3 =$ _____ | 42. | $33 \div 3 =$ _____ |
| 3. | $8 \times 3 =$ _____ | 23. | $3 \times 3 =$ _____ | 43. | $24 \div 3 =$ _____ |
| 4. | $4 \times 3 =$ _____ | 24. | $4 \times 3 =$ _____ | 44. | $15 \div 3 =$ _____ |
| 5. | $3 \times 3 =$ _____ | 25. | $6 \times 3 =$ _____ | 45. | $21 \div 3 =$ _____ |
| 6. | $9 \times 3 =$ _____ | 26. | $9 \times 3 =$ _____ | 46. | $18 \div 3 =$ _____ |
| 7. | $11 \times 3 =$ _____ | 27. | $10 \times 3 =$ _____ | 47. | $6 \div 3 =$ _____ |
| 8. | $12 \times 3 =$ _____ | 28. | $7 \times 3 =$ _____ | 48. | $3 \div 3 =$ _____ |
| 9. | $3 \times 3 =$ _____ | 29. | $2 \times 3 =$ _____ | 49. | $27 \div 3 =$ _____ |
| 10. | $1 \times 3 =$ _____ | 30. | $1 \times 3 =$ _____ | 50. | $33 \div 3 =$ _____ |
| 11. | $8 \times 3 =$ _____ | 31. | $6 \div 3 =$ _____ | 51. | $21 \div 3 =$ _____ |
| 12. | $6 \times 3 =$ _____ | 32. | $12 \div 3 =$ _____ | 52. | $12 \div 3 =$ _____ |
| 13. | $7 \times 3 =$ _____ | 33. | $15 \div 3 =$ _____ | 53. | $9 \div 3 =$ _____ |
| 14. | $9 \times 3 =$ _____ | 34. | $27 \div 3 =$ _____ | 54. | $24 \div 3 =$ _____ |
| 15. | $12 \times 3 =$ _____ | 35. | $30 \div 3 =$ _____ | 55. | $15 \div 3 =$ _____ |
| 16. | $11 \times 3 =$ _____ | 36. | $36 \div 3 =$ _____ | 56. | $36 \div 3 =$ _____ |
| 17. | $2 \times 3 =$ _____ | 37. | $21 \div 3 =$ _____ | 57. | $30 \div 3 =$ _____ |
| 18. | $1 \times 3 =$ _____ | 38. | $18 \div 3 =$ _____ | 58. | $18 \div 3 =$ _____ |
| 19. | $10 \times 3 =$ _____ | 39. | $9 \div 3 =$ _____ | 59. | $3 \div 3 =$ _____ |
| 20. | $9 \times 3 =$ _____ | 40. | $3 \div 3 =$ _____ | 60. | $6 \div 3 =$ _____ |

SCORE:
(5 minute limit)

/60

TIME TAKEN (optional)

<input type="text"/>	<input type="text"/>
MINUTES	SECONDS



Name: _____

Date: _____

MULTIPLICATION 1

Practise 3s

Complete first and then use it to help you if you get stuck.

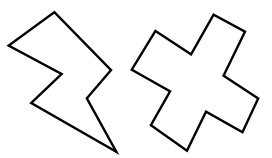
ROCK BOX

1.	$1 \times 3 =$	_____
2.	$2 \times 3 =$	_____
3.	$3 \times 3 =$	_____
4.	$4 \times 3 =$	_____
5.	$5 \times 3 =$	_____
6.	$6 \times 3 =$	_____
7.	$7 \times 3 =$	_____
8.	$8 \times 3 =$	_____
9.	$9 \times 3 =$	_____
10.	$10 \times 3 =$	_____
11.	$11 \times 3 =$	_____
12.	$12 \times 3 =$	_____


- | | | | | | |
|-----|-----------------|-------|-----|-----------------|-------|
| 21. | $11 \times 3 =$ | _____ | 41. | $9 \times 3 =$ | _____ |
| 22. | $4 \times 3 =$ | _____ | 42. | $5 \times 3 =$ | _____ |
| 23. | $10 \times 3 =$ | _____ | 43. | $3 \times 3 =$ | _____ |
| 24. | $8 \times 3 =$ | _____ | 44. | $2 \times 3 =$ | _____ |
| 25. | $9 \times 3 =$ | _____ | 45. | $12 \times 3 =$ | _____ |
| 26. | $1 \times 3 =$ | _____ | 46. | $10 \times 3 =$ | _____ |
| 27. | $3 \times 3 =$ | _____ | 47. | $11 \times 3 =$ | _____ |
| 28. | $12 \times 3 =$ | _____ | 48. | $1 \times 3 =$ | _____ |
| 29. | $4 \times 3 =$ | _____ | 49. | $5 \times 3 =$ | _____ |
| 30. | $9 \times 3 =$ | _____ | 50. | $7 \times 3 =$ | _____ |
| 31. | $8 \times 3 =$ | _____ | 51. | $8 \times 3 =$ | _____ |
| 32. | $7 \times 3 =$ | _____ | 52. | $11 \times 3 =$ | _____ |
| 33. | $11 \times 3 =$ | _____ | 53. | $10 \times 3 =$ | _____ |
| 34. | $7 \times 3 =$ | _____ | 54. | $6 \times 3 =$ | _____ |
| 35. | $1 \times 3 =$ | _____ | 55. | $9 \times 3 =$ | _____ |
| 36. | $12 \times 3 =$ | _____ | 56. | $4 \times 3 =$ | _____ |
| 37. | $2 \times 3 =$ | _____ | 57. | $3 \times 3 =$ | _____ |
| 38. | $5 \times 3 =$ | _____ | 58. | $6 \times 3 =$ | _____ |
| 39. | $4 \times 3 =$ | _____ | 59. | $9 \times 3 =$ | _____ |
| 40. | $6 \times 3 =$ | _____ | 60. | $11 \times 3 =$ | _____ |

Continue here...

- | | | |
|-----|-----------------|-------|
| 13. | $7 \times 3 =$ | _____ |
| 14. | $12 \times 3 =$ | _____ |
| 15. | $8 \times 3 =$ | _____ |
| 16. | $12 \times 3 =$ | _____ |
| 17. | $10 \times 3 =$ | _____ |
| 18. | $9 \times 3 =$ | _____ |
| 19. | $11 \times 3 =$ | _____ |
| 20. | $3 \times 3 =$ | _____ |



SCORE: _____



Grown-ups:
Can learners spot links between neighbouring questions?



Name: _____

Date: _____

MULTIPLICATION 2

Practise 3s

Complete first and then use it to help you if you get stuck.

ROCK BOX

1. $1 \times 3 =$ _____

2. $2 \times 3 =$ _____

3. $3 \times 3 =$ _____

4. $4 \times 3 =$ _____

5. $5 \times 3 =$ _____

6. $6 \times 3 =$ _____

7. $7 \times 3 =$ _____

8. $8 \times 3 =$ _____

9. $9 \times 3 =$ _____

10. $10 \times 3 =$ _____

11. $11 \times 3 =$ _____

12. $12 \times 3 =$ _____

13. $3 \times 1 =$ _____

14. $3 \times 2 =$ _____

15. $3 \times 3 =$ _____

16. $3 \times 4 =$ _____

17. $3 \times 5 =$ _____

18. $3 \times 6 =$ _____

19. $3 \times 7 =$ _____

20. $3 \times 8 =$ _____

21. $3 \times 9 =$ _____

22. $3 \times 10 =$ _____

23. $3 \times 11 =$ _____

24. $3 \times 12 =$ _____

41. $3 \times 3 =$ _____

42. $5 \times 3 =$ _____

43. $3 \times 8 =$ _____

44. $7 \times 3 =$ _____

45. $8 \times 3 =$ _____

46. $3 \times 12 =$ _____

47. $4 \times 3 =$ _____

48. $3 \times 2 =$ _____

49. $1 \times 3 =$ _____

50. $3 \times 5 =$ _____

51. $3 \times 11 =$ _____

52. $3 \times 1 =$ _____

53. $3 \times 12 =$ _____

54. $3 \times 7 =$ _____

55. $3 \times 9 =$ _____

56. $3 \times 6 =$ _____

57. $3 \times 5 =$ _____

58. $3 \times 10 =$ _____

59. $3 \times 3 =$ _____

60. $3 \times 3 =$ _____

Continue here...

25. $3 \times 4 =$ _____

26. $1 \times 3 =$ _____

27. $3 \times 5 =$ _____

28. $6 \times 3 =$ _____

29. $3 \times 6 =$ _____

30. $5 \times 3 =$ _____

31. $3 \times 2 =$ _____

32. $4 \times 3 =$ _____

33. $3 \times 7 =$ _____

34. $3 \times 8 =$ _____

35. $9 \times 3 =$ _____

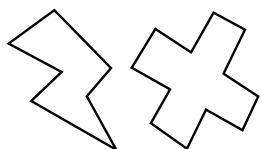
36. $3 \times 11 =$ _____

37. $12 \times 3 =$ _____

38. $11 \times 3 =$ _____

39. $2 \times 3 =$ _____

40. $3 \times 1 =$ _____



SCORE:

Grown-ups:
Can learners spot links between neighbouring questions?



Name: _____

Date: _____

MISSING NUMBER 1

Practise 3s

Complete first and then use it to help you if you get stuck.

ROCK BOX

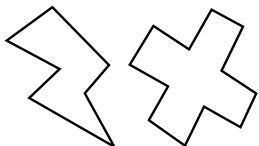
1.	_____	× 3 = 3
2.	_____	× 3 = 6
3.	_____	× 3 = 9
4.	_____	× 3 = 12
5.	_____	× 3 = 15
6.	_____	× 3 = 18
7.	_____	× 3 = 21
8.	_____	× 3 = 24
9.	_____	× 3 = 27
10.	_____	× 3 = 30
11.	_____	× 3 = 33
12.	_____	× 3 = 36

- 21. _____ × 3 = 15
- 22. _____ × 3 = 6
- 23. _____ × 3 = 18
- 24. _____ × 3 = 36
- 25. _____ × 3 = 30
- 26. _____ × 3 = 27
- 27. _____ × 3 = 33
- 28. _____ × 3 = 21
- 29. _____ × 3 = 12
- 30. _____ × 3 = 9
- 31. _____ × 3 = 3
- 32. _____ × 3 = 33
- 33. _____ × 3 = 24
- 34. _____ × 3 = 15
- 35. _____ × 3 = 3
- 36. _____ × 3 = 12
- 37. _____ × 3 = 18
- 38. _____ × 3 = 21
- 39. _____ × 3 = 27
- 40. _____ × 3 = 36

- 41. _____ × 3 = 6
- 42. _____ × 3 = 9
- 42. _____ × 3 = 3
- 44. _____ × 3 = 15
- 45. _____ × 3 = 21
- 46. _____ × 3 = 12
- 47. _____ × 3 = 24
- 48. _____ × 3 = 36
- 49. _____ × 3 = 30
- 50. _____ × 3 = 27
- 51. _____ × 3 = 18
- 52. _____ × 3 = 9
- 53. _____ × 3 = 33
- 54. _____ × 3 = 3
- 55. _____ × 3 = 6
- 56. _____ × 3 = 21
- 57. _____ × 3 = 15
- 58. _____ × 3 = 24
- 59. _____ × 3 = 27
- 60. _____ × 3 = 30

Continue here...

- 13. _____ × 3 = 12
- 14. _____ × 3 = 3
- 15. _____ × 3 = 30
- 16. _____ × 3 = 27
- 17. _____ × 3 = 36
- 18. _____ × 3 = 33
- 19. _____ × 3 = 24
- 20. _____ × 3 = 21



SCORE:

Grown-ups:
Can learners spot links between neighbouring questions?



Name: _____

Date: _____

MISSING NUMBER 2

Practise 3s

Complete first and then use it to help you if you get stuck.

ROCK BOX			
1.	$\times 3 = 3$	2.	$\times 1 = 3$
3.	$\times 3 = 6$	4.	$\times 2 = 6$
5.	$\times 3 = 9$	6.	$\times 3 = 9$
7.	$\times 3 = 12$	8.	$\times 4 = 12$
9.	$\times 3 = 15$	10.	$\times 5 = 15$
11.	$\times 3 = 18$	12.	$\times 6 = 18$
13.	$\times 3 = 21$	14.	$\times 7 = 21$
15.	$\times 3 = 24$	16.	$\times 8 = 24$
17.	$\times 3 = 27$	18.	$\times 9 = 27$
19.	$\times 3 = 30$	20.	$\times 10 = 30$
21.	$\times 3 = 33$	22.	$\times 11 = 33$
23.	$\times 3 = 36$	24.	$\times 12 = 36$

Continue here...

25. _____ $\times 3 = 27$

33. _____ $\times 1 = 3$

26. _____ $\times 9 = 27$

34. _____ $\times 11 = 33$

27. _____ $\times 3 = 18$

35. _____ $\times 9 = 27$

28. _____ $\times 7 = 21$

36. _____ $\times 3 = 36$

29. _____ $\times 8 = 24$

37. _____ $\times 3 = 21$

30. _____ $\times 3 = 33$

38. _____ $\times 5 = 15$

31. _____ $\times 12 = 36$

39. _____ $\times 3 = 18$

32. _____ $\times 3 = 3$

40. _____ $\times 3 = 9$

41. _____ $\times 4 = 12$

42. _____ $\times 3 = 6$

43. _____ $\times 3 = 24$

44. _____ $\times 12 = 36$

45. _____ $\times 6 = 18$

46. _____ $\times 7 = 21$

47. _____ $\times 3 = 27$

48. _____ $\times 11 = 33$

49. _____ $\times 3 = 30$

50. _____ $\times 3 = 3$

51. _____ $\times 3 = 36$

52. _____ $\times 3 = 9$

53. _____ $\times 3 = 12$

54. _____ $\times 3 = 15$

55. _____ $\times 3 = 30$

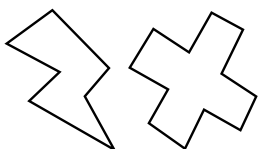
56. _____ $\times 2 = 6$

57. _____ $\times 8 = 24$

58. _____ $\times 1 = 3$

59. _____ $\times 9 = 27$

60. _____ $\times 12 = 36$



SCORE:

Grown-ups:
Can learners spot links between neighbouring questions?



Name: _____

Date: _____

DIVISION 1

Practise 3s

Complete first and then use it to help you if you get stuck.

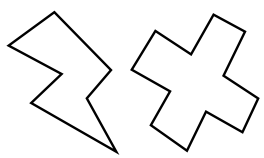
ROCK BOX

1.	$3 \div 3 =$	_____
2.	$6 \div 3 =$	_____
3.	$9 \div 3 =$	_____
4.	$12 \div 3 =$	_____
5.	$15 \div 3 =$	_____
6.	$18 \div 3 =$	_____
7.	$21 \div 3 =$	_____
8.	$24 \div 3 =$	_____
9.	$27 \div 3 =$	_____
10.	$30 \div 3 =$	_____
11.	$33 \div 3 =$	_____
12.	$36 \div 3 =$	_____

- | | | | | | |
|-----|---------------|-------|-----|---------------|-------|
| 21. | $33 \div 3 =$ | _____ | 41. | $27 \div 3 =$ | _____ |
| 22. | $27 \div 3 =$ | _____ | 42. | $24 \div 3 =$ | _____ |
| 23. | $15 \div 3 =$ | _____ | 43. | $6 \div 3 =$ | _____ |
| 24. | $12 \div 3 =$ | _____ | 44. | $18 \div 3 =$ | _____ |
| 25. | $9 \div 3 =$ | _____ | 45. | $21 \div 3 =$ | _____ |
| 26. | $18 \div 3 =$ | _____ | 46. | $18 \div 3 =$ | _____ |
| 27. | $36 \div 3 =$ | _____ | 47. | $15 \div 3 =$ | _____ |
| 28. | $24 \div 3 =$ | _____ | 48. | $24 \div 3 =$ | _____ |
| 29. | $12 \div 3 =$ | _____ | 49. | $6 \div 3 =$ | _____ |
| 30. | $30 \div 3 =$ | _____ | 50. | $3 \div 3 =$ | _____ |
| 31. | $33 \div 3 =$ | _____ | 51. | $12 \div 3 =$ | _____ |
| 32. | $27 \div 3 =$ | _____ | 52. | $27 \div 3 =$ | _____ |
| 33. | $21 \div 3 =$ | _____ | 53. | $9 \div 3 =$ | _____ |
| 34. | $3 \div 3 =$ | _____ | 54. | $24 \div 3 =$ | _____ |
| 35. | $15 \div 3 =$ | _____ | 55. | $33 \div 3 =$ | _____ |
| 36. | $24 \div 3 =$ | _____ | 56. | $30 \div 3 =$ | _____ |
| 37. | $36 \div 3 =$ | _____ | 57. | $36 \div 3 =$ | _____ |
| 38. | $9 \div 3 =$ | _____ | 58. | $21 \div 3 =$ | _____ |
| 39. | $3 \div 3 =$ | _____ | 59. | $15 \div 3 =$ | _____ |
| 40. | $18 \div 3 =$ | _____ | 60. | $18 \div 3 =$ | _____ |

Continue here...

- | | | |
|-----|---------------|-------|
| 13. | $36 \div 3 =$ | _____ |
| 14. | $24 \div 3 =$ | _____ |
| 15. | $30 \div 3 =$ | _____ |
| 16. | $18 \div 3 =$ | _____ |
| 17. | $33 \div 3 =$ | _____ |
| 18. | $3 \div 3 =$ | _____ |
| 19. | $9 \div 3 =$ | _____ |
| 20. | $21 \div 3 =$ | _____ |



SCORE: _____



Grown-ups:
Can learners spot links between neighbouring questions?



Name: _____

Date: _____

DIVISION 2

Practise 3s

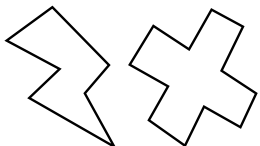
Complete first and then use it to help you if you get stuck.

ROCK BOX	
1. $3 \div 3 =$	2. $3 \div 1 =$
3. $6 \div 3 =$	4. $6 \div 2 =$
5. $9 \div 3 =$	6. $9 \div 3 =$
7. $12 \div 3 =$	8. $12 \div 4 =$
9. $15 \div 3 =$	10. $15 \div 5 =$
11. $18 \div 3 =$	12. $18 \div 6 =$
13. $21 \div 3 =$	14. $21 \div 7 =$
15. $24 \div 3 =$	16. $24 \div 8 =$
17. $27 \div 3 =$	18. $27 \div 9 =$
19. $30 \div 3 =$	20. $30 \div 10 =$
21. $33 \div 3 =$	22. $33 \div 11 =$
23. $36 \div 3 =$	24. $36 \div 12 =$

Continue here...

- | | |
|-------------------------|--------------------------|
| 25. $15 \div 5 =$ _____ | 33. $18 \div 6 =$ _____ |
| 26. $9 \div 3 =$ _____ | 34. $15 \div 3 =$ _____ |
| 27. $15 \div 3 =$ _____ | 35. $18 \div 3 =$ _____ |
| 28. $30 \div 3 =$ _____ | 36. $27 \div 9 =$ _____ |
| 29. $9 \div 3 =$ _____ | 37. $33 \div 11 =$ _____ |
| 30. $3 \div 3 =$ _____ | 38. $27 \div 3 =$ _____ |
| 31. $3 \div 1 =$ _____ | 39. $12 \div 3 =$ _____ |
| 32. $6 \div 3 =$ _____ | 40. $21 \div 7 =$ _____ |

41. $24 \div 8 =$ _____
42. $18 \div 6 =$ _____
43. $15 \div 3 =$ _____
44. $36 \div 12 =$ _____
45. $30 \div 3 =$ _____
46. $9 \div 3 =$ _____
47. $21 \div 3 =$ _____
48. $3 \div 1 =$ _____
49. $33 \div 3 =$ _____
50. $12 \div 4 =$ _____
51. $12 \div 3 =$ _____
52. $24 \div 3 =$ _____
53. $27 \div 9 =$ _____
54. $24 \div 8 =$ _____
55. $30 \div 3 =$ _____
56. $18 \div 3 =$ _____
57. $6 \div 2 =$ _____
58. $9 \div 3 =$ _____
59. $21 \div 3 =$ _____
60. $15 \div 5 =$ _____



SCORE:

Grown-ups:
Can learners spot links between neighbouring questions?





CHECK 1



Name: _____

Date: _____

- | | | | | | |
|-----|-----------------------|-----|-----------------------|-----|---------------------|
| 1. | $8 \times 3 =$ _____ | 21. | $8 \times 3 =$ _____ | 41. | $6 \div 3 =$ _____ |
| 2. | $2 \times 3 =$ _____ | 22. | $10 \times 3 =$ _____ | 42. | $30 \div 3 =$ _____ |
| 3. | $5 \times 3 =$ _____ | 23. | $12 \times 3 =$ _____ | 43. | $24 \div 3 =$ _____ |
| 4. | $4 \times 3 =$ _____ | 24. | $9 \times 3 =$ _____ | 44. | $3 \div 3 =$ _____ |
| 5. | $3 \times 3 =$ _____ | 25. | $2 \times 3 =$ _____ | 45. | $15 \div 3 =$ _____ |
| 6. | $6 \times 3 =$ _____ | 26. | $1 \times 3 =$ _____ | 46. | $27 \div 3 =$ _____ |
| 7. | $7 \times 3 =$ _____ | 27. | $5 \times 3 =$ _____ | 47. | $21 \div 3 =$ _____ |
| 8. | $10 \times 3 =$ _____ | 28. | $4 \times 3 =$ _____ | 48. | $3 \div 3 =$ _____ |
| 9. | $12 \times 3 =$ _____ | 29. | $3 \times 3 =$ _____ | 49. | $30 \div 3 =$ _____ |
| 10. | $1 \times 3 =$ _____ | 30. | $6 \times 3 =$ _____ | 50. | $36 \div 3 =$ _____ |
| 11. | $9 \times 3 =$ _____ | 31. | $9 \div 3 =$ _____ | 51. | $12 \div 3 =$ _____ |
| 12. | $2 \times 3 =$ _____ | 32. | $18 \div 3 =$ _____ | 52. | $18 \div 3 =$ _____ |
| 13. | $11 \times 3 =$ _____ | 33. | $27 \div 3 =$ _____ | 53. | $15 \div 3 =$ _____ |
| 14. | $7 \times 3 =$ _____ | 34. | $15 \div 3 =$ _____ | 54. | $9 \div 3 =$ _____ |
| 15. | $9 \times 3 =$ _____ | 35. | $30 \div 3 =$ _____ | 55. | $30 \div 3 =$ _____ |
| 16. | $4 \times 3 =$ _____ | 36. | $3 \div 3 =$ _____ | 56. | $33 \div 3 =$ _____ |
| 17. | $3 \times 3 =$ _____ | 37. | $33 \div 3 =$ _____ | 57. | $27 \div 3 =$ _____ |
| 18. | $6 \times 3 =$ _____ | 38. | $36 \div 3 =$ _____ | 58. | $3 \div 3 =$ _____ |
| 19. | $1 \times 3 =$ _____ | 39. | $24 \div 3 =$ _____ | 59. | $6 \div 3 =$ _____ |
| 20. | $5 \times 3 =$ _____ | 40. | $12 \div 3 =$ _____ | 60. | $12 \div 3 =$ _____ |

SCORE:
(5 minute limit)

/60

TIME TAKEN (optional)

MINUTES SECONDS



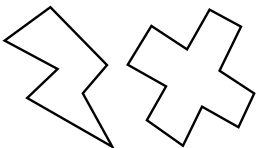
Name: _____

Date: _____

MULTIPLICATION 3

Practise 3s

- | | | | | | |
|-----|-----------------------|-----|-----------------------|-----|-----------------------|
| 1. | $3 \times 5 =$ _____ | 21. | $3 \times 8 =$ _____ | 41. | $1 \times 3 =$ _____ |
| 2. | $3 \times 3 =$ _____ | 22. | $3 \times 1 =$ _____ | 42. | $3 \times 12 =$ _____ |
| 3. | $5 \times 3 =$ _____ | 23. | $3 \times 2 =$ _____ | 43. | $11 \times 3 =$ _____ |
| 4. | $3 \times 7 =$ _____ | 24. | $4 \times 3 =$ _____ | 44. | $3 \times 7 =$ _____ |
| 5. | $3 \times 4 =$ _____ | 25. | $3 \times 6 =$ _____ | 45. | $3 \times 1 =$ _____ |
| 6. | $7 \times 3 =$ _____ | 26. | $9 \times 3 =$ _____ | 46. | $3 \times 3 =$ _____ |
| 7. | $5 \times 3 =$ _____ | 27. | $3 \times 12 =$ _____ | 47. | $12 \times 3 =$ _____ |
| 8. | $3 \times 8 =$ _____ | 28. | $11 \times 3 =$ _____ | 48. | $9 \times 3 =$ _____ |
| 9. | $9 \times 3 =$ _____ | 29. | $3 \times 1 =$ _____ | 49. | $3 \times 6 =$ _____ |
| 10. | $3 \times 11 =$ _____ | 30. | $10 \times 3 =$ _____ | 50. | $3 \times 3 =$ _____ |
| 11. | $12 \times 3 =$ _____ | 31. | $3 \times 9 =$ _____ | 51. | $5 \times 3 =$ _____ |
| 12. | $3 \times 12 =$ _____ | 32. | $3 \times 5 =$ _____ | 52. | $10 \times 3 =$ _____ |
| 13. | $1 \times 3 =$ _____ | 33. | $3 \times 3 =$ _____ | 53. | $3 \times 5 =$ _____ |
| 14. | $3 \times 10 =$ _____ | 34. | $3 \times 2 =$ _____ | 54. | $8 \times 3 =$ _____ |
| 15. | $3 \times 7 =$ _____ | 35. | $7 \times 3 =$ _____ | 55. | $3 \times 2 =$ _____ |
| 16. | $6 \times 3 =$ _____ | 36. | $3 \times 4 =$ _____ | 56. | $3 \times 4 =$ _____ |
| 17. | $3 \times 3 =$ _____ | 37. | $3 \times 3 =$ _____ | 57. | $7 \times 3 =$ _____ |
| 18. | $1 \times 3 =$ _____ | 38. | $2 \times 3 =$ _____ | 58. | $9 \times 3 =$ _____ |
| 19. | $4 \times 3 =$ _____ | 39. | $9 \times 3 =$ _____ | 59. | $3 \times 8 =$ _____ |
| 20. | $8 \times 3 =$ _____ | 40. | $3 \times 8 =$ _____ | 60. | $6 \times 3 =$ _____ |



SCORE:

Grown-ups:
Can learners spot links between neighbouring questions?



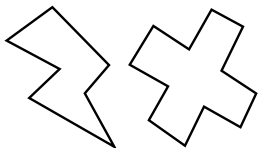
Name: _____

MISSING NUMBERS 3

Practise 3s

Date: _____

- | | | |
|---------------------|---------------------|---------------------|
| 1. _____ × 3 = 33 | 21. _____ × 3 = 12 | 41. _____ × 3 = 3 |
| 2. _____ × 3 = 36 | 22. _____ × 12 = 36 | 42. _____ × 11 = 33 |
| 3. _____ × 7 = 21 | 23. _____ × 3 = 24 | 43. _____ × 3 = 24 |
| 4. _____ × 3 = 15 | 24. _____ × 7 = 21 | 44. _____ × 9 = 27 |
| 5. _____ × 9 = 27 | 25. _____ × 5 = 15 | 45. _____ × 3 = 27 |
| 6. _____ × 6 = 18 | 26. _____ × 6 = 18 | 46. _____ × 3 = 30 |
| 7. _____ × 3 = 18 | 27. _____ × 3 = 6 | 47. _____ × 3 = 12 |
| 8. _____ × 4 = 12 | 28. _____ × 1 = 3 | 48. _____ × 2 = 6 |
| 9. _____ × 9 = 27 | 29. _____ × 3 = 30 | 49. _____ × 1 = 3 |
| 10. _____ × 3 = 9 | 30. _____ × 3 = 33 | 50. _____ × 3 = 24 |
| 11. _____ × 3 = 6 | 31. _____ × 9 = 27 | 51. _____ × 6 = 18 |
| 12. _____ × 1 = 3 | 32. _____ × 4 = 12 | 52. _____ × 4 = 12 |
| 13. _____ × 3 = 3 | 33. _____ × 3 = 9 | 53. _____ × 3 = 15 |
| 14. _____ × 3 = 30 | 34. _____ × 3 = 30 | 54. _____ × 3 = 21 |
| 15. _____ × 3 = 33 | 35. _____ × 3 = 9 | 55. _____ × 9 = 27 |
| 16. _____ × 12 = 36 | 36. _____ × 5 = 15 | 56. _____ × 3 = 33 |
| 17. _____ × 5 = 15 | 37. _____ × 3 = 27 | 57. _____ × 12 = 36 |
| 18. _____ × 8 = 24 | 38. _____ × 4 = 12 | 58. _____ × 3 = 36 |
| 19. _____ × 3 = 12 | 39. _____ × 3 = 3 | 59. _____ × 3 = 9 |
| 20. _____ × 3 = 21 | 40. _____ × 6 = 18 | 60. _____ × 9 = 27 |



SCORE:

Grown-ups:
Can learners spot links between neighbouring questions?



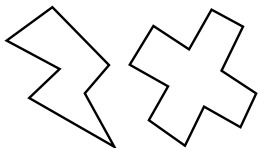
Name: _____

Date: _____

DIVISION 3

Practise 3s

- | | | | | | |
|-----|----------------------|-----|----------------------|-----|----------------------|
| 1. | $21 \div 3 =$ _____ | 21. | $36 \div 3 =$ _____ | 41. | $24 \div 3 =$ _____ |
| 2. | $27 \div 3 =$ _____ | 22. | $18 \div 3 =$ _____ | 42. | $27 \div 3 =$ _____ |
| 3. | $9 \div 3 =$ _____ | 23. | $27 \div 3 =$ _____ | 43. | $21 \div 7 =$ _____ |
| 4. | $6 \div 2 =$ _____ | 24. | $21 \div 7 =$ _____ | 44. | $33 \div 11 =$ _____ |
| 5. | $6 \div 3 =$ _____ | 25. | $9 \div 3 =$ _____ | 45. | $33 \div 3 =$ _____ |
| 6. | $12 \div 4 =$ _____ | 26. | $30 \div 3 =$ _____ | 46. | $3 \div 1 =$ _____ |
| 7. | $30 \div 3 =$ _____ | 27. | $15 \div 5 =$ _____ | 47. | $30 \div 3 =$ _____ |
| 8. | $33 \div 11 =$ _____ | 28. | $21 \div 3 =$ _____ | 48. | $27 \div 9 =$ _____ |
| 9. | $33 \div 3 =$ _____ | 29. | $12 \div 4 =$ _____ | 49. | $24 \div 8 =$ _____ |
| 10. | $21 \div 3 =$ _____ | 30. | $18 \div 3 =$ _____ | 50. | $12 \div 3 =$ _____ |
| 11. | $15 \div 5 =$ _____ | 31. | $12 \div 3 =$ _____ | 51. | $12 \div 4 =$ _____ |
| 12. | $36 \div 12 =$ _____ | 32. | $9 \div 3 =$ _____ | 52. | $18 \div 3 =$ _____ |
| 13. | $36 \div 3 =$ _____ | 33. | $27 \div 9 =$ _____ | 53. | $9 \div 3 =$ _____ |
| 14. | $24 \div 3 =$ _____ | 34. | $30 \div 3 =$ _____ | 54. | $21 \div 3 =$ _____ |
| 15. | $33 \div 3 =$ _____ | 35. | $33 \div 3 =$ _____ | 55. | $9 \div 3 =$ _____ |
| 16. | $15 \div 3 =$ _____ | 36. | $30 \div 3 =$ _____ | 56. | $36 \div 3 =$ _____ |
| 17. | $18 \div 6 =$ _____ | 37. | $36 \div 12 =$ _____ | 57. | $18 \div 3 =$ _____ |
| 18. | $12 \div 3 =$ _____ | 38. | $3 \div 1 =$ _____ | 58. | $15 \div 3 =$ _____ |
| 19. | $9 \div 3 =$ _____ | 39. | $3 \div 3 =$ _____ | 59. | $6 \div 2 =$ _____ |
| 20. | $27 \div 9 =$ _____ | 40. | $24 \div 8 =$ _____ | 60. | $6 \div 3 =$ _____ |



SCORE:

Grown-ups:
Can learners spot links
between neighbouring
questions?



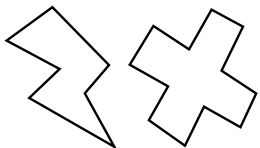
Name: _____

Date: _____

MULTIPLICATION 4

Practise 3s

- | | | | | | |
|-----|-----------------------|-----|-----------------------|-----|-----------------------|
| 1. | $12 \times 3 =$ _____ | 21. | $1 \times 3 =$ _____ | 41. | $3 \times 3 =$ _____ |
| 2. | $11 \times 3 =$ _____ | 22. | $3 \times 4 =$ _____ | 42. | $3 \times 2 =$ _____ |
| 3. | $3 \times 8 =$ _____ | 23. | $4 \times 3 =$ _____ | 43. | $8 \times 3 =$ _____ |
| 4. | $9 \times 3 =$ _____ | 24. | $3 \times 3 =$ _____ | 44. | $3 \times 4 =$ _____ |
| 5. | $3 \times 7 =$ _____ | 25. | $3 \times 6 =$ _____ | 45. | $3 \times 2 =$ _____ |
| 6. | $3 \times 5 =$ _____ | 26. | $9 \times 3 =$ _____ | 46. | $1 \times 3 =$ _____ |
| 7. | $6 \times 3 =$ _____ | 27. | $3 \times 8 =$ _____ | 47. | $11 \times 3 =$ _____ |
| 8. | $3 \times 4 =$ _____ | 28. | $3 \times 10 =$ _____ | 48. | $12 \times 3 =$ _____ |
| 9. | $3 \times 3 =$ _____ | 29. | $11 \times 3 =$ _____ | 49. | $3 \times 7 =$ _____ |
| 10. | $12 \times 3 =$ _____ | 30. | $3 \times 6 =$ _____ | 50. | $10 \times 3 =$ _____ |
| 11. | $6 \times 3 =$ _____ | 31. | $6 \times 3 =$ _____ | 51. | $4 \times 3 =$ _____ |
| 12. | $7 \times 3 =$ _____ | 32. | $9 \times 3 =$ _____ | 52. | $3 \times 9 =$ _____ |
| 13. | $10 \times 3 =$ _____ | 33. | $3 \times 3 =$ _____ | 53. | $6 \times 3 =$ _____ |
| 14. | $3 \times 12 =$ _____ | 34. | $5 \times 3 =$ _____ | 54. | $3 \times 8 =$ _____ |
| 15. | $11 \times 3 =$ _____ | 35. | $3 \times 8 =$ _____ | 55. | $4 \times 3 =$ _____ |
| 16. | $6 \times 3 =$ _____ | 36. | $3 \times 11 =$ _____ | 56. | $11 \times 3 =$ _____ |
| 17. | $3 \times 8 =$ _____ | 37. | $3 \times 10 =$ _____ | 57. | $3 \times 3 =$ _____ |
| 18. | $3 \times 3 =$ _____ | 38. | $1 \times 3 =$ _____ | 58. | $3 \times 10 =$ _____ |
| 19. | $2 \times 3 =$ _____ | 39. | $2 \times 3 =$ _____ | 59. | $3 \times 6 =$ _____ |
| 20. | $3 \times 1 =$ _____ | 40. | $3 \times 5 =$ _____ | 60. | $9 \times 3 =$ _____ |



SCORE:



Grown-ups:
Can learners spot links between neighbouring questions?



Name: _____

MISSING NUMBERS 4

Practise 3s

Date: _____

1. _____ \times 3 = 18

21. _____ \times 3 = 15

41. _____ \times 3 = 18

2. _____ \times 9 = 27

22. _____ \times 3 = 12

42. _____ \times 5 = 15

3. _____ \times 8 = 24

23. _____ \times 3 = 9

43. _____ \times 3 = 30

4. _____ \times 4 = 12

24. _____ \times 6 = 18

44. _____ \times 3 = 3

5. _____ \times 3 = 9

25. _____ \times 3 = 21

45. _____ \times 9 = 27

6. _____ \times 3 = 15

26. _____ \times 3 = 15

46. _____ \times 3 = 33

7. _____ \times 6 = 18

27. _____ \times 3 = 27

47. _____ \times 7 = 21

8. _____ \times 3 = 3

28. _____ \times 8 = 24

48. _____ \times 3 = 9

9. _____ \times 3 = 6

29. _____ \times 3 = 3

49. _____ \times 2 = 6

10. _____ \times 3 = 30

30. _____ \times 12 = 36

50. _____ \times 3 = 12

11. _____ \times 12 = 36

31. _____ \times 3 = 9

51. _____ \times 5 = 15

12. _____ \times 3 = 18

32. _____ \times 2 = 6

52. _____ \times 3 = 18

13. _____ \times 3 = 21

33. _____ \times 6 = 18

53. _____ \times 3 = 30

14. _____ \times 1 = 3

34. _____ \times 3 = 6

54. _____ \times 12 = 36

15. _____ \times 3 = 6

35. _____ \times 3 = 3

55. _____ \times 1 = 3

16. _____ \times 3 = 33

36. _____ \times 12 = 36

56. _____ \times 3 = 30

17. _____ \times 9 = 27

37. _____ \times 9 = 27

57. _____ \times 9 = 27

18. _____ \times 3 = 30

38. _____ \times 3 = 12

58. _____ \times 3 = 12

19. _____ \times 6 = 18

39. _____ \times 3 = 9

59. _____ \times 3 = 21

20. _____ \times 3 = 21

40. _____ \times 8 = 24

60. _____ \times 7 = 21



SCORE:

Grown-ups:
Can learners spot links between neighbouring questions?



Name: _____

Date: _____

DIVISION 4

Practise 3s

1. $36 \div 3 =$ _____ 21. $30 \div 3 =$ _____ 41. $36 \div 3 =$ _____

2. $33 \div 3 =$ _____ 22. $36 \div 3 =$ _____ 42. $3 \div 1 =$ _____

3. $3 \div 1 =$ _____ 23. $33 \div 11 =$ _____ 43. $3 \div 3 =$ _____

4. $3 \div 3 =$ _____ 24. $21 \div 3 =$ _____ 44. $12 \div 3 =$ _____

5. $27 \div 9 =$ _____ 25. $21 \div 7 =$ _____ 45. $21 \div 7 =$ _____

6. $24 \div 3 =$ _____ 26. $12 \div 3 =$ _____ 46. $21 \div 3 =$ _____

7. $15 \div 3 =$ _____ 27. $15 \div 3 =$ _____ 47. $27 \div 9 =$ _____

8. $18 \div 6 =$ _____ 28. $27 \div 3 =$ _____ 48. $30 \div 3 =$ _____

9. $21 \div 7 =$ _____ 29. $27 \div 9 =$ _____ 49. $33 \div 3 =$ _____

10. $30 \div 3 =$ _____ 30. $24 \div 3 =$ _____ 50. $6 \div 3 =$ _____

11. $9 \div 3 =$ _____ 31. $18 \div 3 =$ _____ 51. $33 \div 11 =$ _____

12. $6 \div 2 =$ _____ 32. $12 \div 4 =$ _____ 52. $9 \div 3 =$ _____

13. $15 \div 3 =$ _____ 33. $3 \div 3 =$ _____ 53. $36 \div 12 =$ _____

14. $18 \div 3 =$ _____ 34. $15 \div 5 =$ _____ 54. $12 \div 3 =$ _____

15. $27 \div 3 =$ _____ 35. $21 \div 7 =$ _____ 55. $21 \div 3 =$ _____

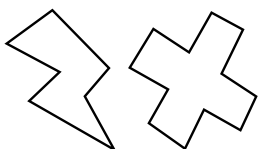
16. $12 \div 3 =$ _____ 36. $6 \div 3 =$ _____ 56. $18 \div 6 =$ _____

17. $12 \div 4 =$ _____ 37. $27 \div 9 =$ _____ 57. $3 \div 3 =$ _____

18. $24 \div 8 =$ _____ 38. $9 \div 3 =$ _____ 58. $6 \div 2 =$ _____

19. $3 \div 3 =$ _____ 39. $33 \div 11 =$ _____ 59. $30 \div 3 =$ _____

20. $36 \div 12 =$ _____ 40. $18 \div 6 =$ _____ 60. $3 \div 1 =$ _____



SCORE:

Grown-ups:
Can learners spot links between neighbouring questions?





CHECK 2



Name: _____

Date: _____

- | | | |
|---------------------------|---------------------------|-------------------------|
| 1. $9 \times 3 =$ _____ | 21. $3 \times 3 =$ _____ | 41. $3 \div 3 =$ _____ |
| 2. $4 \times 3 =$ _____ | 22. $10 \times 3 =$ _____ | 42. $27 \div 3 =$ _____ |
| 3. $12 \times 3 =$ _____ | 23. $2 \times 3 =$ _____ | 43. $21 \div 3 =$ _____ |
| 4. $3 \times 3 =$ _____ | 24. $4 \times 3 =$ _____ | 44. $33 \div 3 =$ _____ |
| 5. $6 \times 3 =$ _____ | 25. $8 \times 3 =$ _____ | 45. $6 \div 3 =$ _____ |
| 6. $10 \times 3 =$ _____ | 26. $6 \times 3 =$ _____ | 46. $30 \div 3 =$ _____ |
| 7. $12 \times 3 =$ _____ | 27. $12 \times 3 =$ _____ | 47. $36 \div 3 =$ _____ |
| 8. $2 \times 3 =$ _____ | 28. $5 \times 3 =$ _____ | 48. $3 \div 3 =$ _____ |
| 9. $1 \times 3 =$ _____ | 29. $1 \times 3 =$ _____ | 49. $9 \div 3 =$ _____ |
| 10. $8 \times 3 =$ _____ | 30. $7 \times 3 =$ _____ | 50. $24 \div 3 =$ _____ |
| 11. $4 \times 3 =$ _____ | 31. $27 \div 3 =$ _____ | 51. $12 \div 3 =$ _____ |
| 12. $5 \times 3 =$ _____ | 32. $15 \div 3 =$ _____ | 52. $21 \div 3 =$ _____ |
| 13. $7 \times 3 =$ _____ | 33. $12 \div 3 =$ _____ | 53. $9 \div 3 =$ _____ |
| 14. $6 \times 3 =$ _____ | 34. $30 \div 3 =$ _____ | 54. $33 \div 3 =$ _____ |
| 15. $10 \times 3 =$ _____ | 35. $33 \div 3 =$ _____ | 55. $30 \div 3 =$ _____ |
| 16. $12 \times 3 =$ _____ | 36. $9 \div 3 =$ _____ | 56. $15 \div 3 =$ _____ |
| 17. $1 \times 3 =$ _____ | 37. $18 \div 3 =$ _____ | 57. $6 \div 3 =$ _____ |
| 18. $11 \times 3 =$ _____ | 38. $21 \div 3 =$ _____ | 58. $21 \div 3 =$ _____ |
| 19. $9 \times 3 =$ _____ | 39. $15 \div 3 =$ _____ | 59. $18 \div 3 =$ _____ |
| 20. $7 \times 3 =$ _____ | 40. $24 \div 3 =$ _____ | 60. $3 \div 3 =$ _____ |

SCORE:
(5 minute limit)

/60

TIME TAKEN (optional)

<input type="text"/>	<input type="text"/>
MINUTES	SECONDS

