


NAME: \_\_\_\_\_

23



**VIBE**

**SCORE**

**BASELINE**

**CHECK 1**

**CHECK 2**



# BASELINE



Name: \_\_\_\_\_

Date: \_\_\_\_\_

- |     |                       |     |                       |     |                     |
|-----|-----------------------|-----|-----------------------|-----|---------------------|
| 1.  | $5 \times 2 =$ _____  | 21. | $8 \times 2 =$ _____  | 41. | $20 \div 2 =$ _____ |
| 2.  | $7 \times 2 =$ _____  | 22. | $5 \times 2 =$ _____  | 42. | $22 \div 2 =$ _____ |
| 3.  | $8 \times 2 =$ _____  | 23. | $3 \times 2 =$ _____  | 43. | $16 \div 2 =$ _____ |
| 4.  | $4 \times 2 =$ _____  | 24. | $4 \times 2 =$ _____  | 44. | $10 \div 2 =$ _____ |
| 5.  | $3 \times 2 =$ _____  | 25. | $6 \times 2 =$ _____  | 45. | $14 \div 2 =$ _____ |
| 6.  | $9 \times 2 =$ _____  | 26. | $9 \times 2 =$ _____  | 46. | $12 \div 2 =$ _____ |
| 7.  | $11 \times 2 =$ _____ | 27. | $10 \times 2 =$ _____ | 47. | $4 \div 2 =$ _____  |
| 8.  | $12 \times 2 =$ _____ | 28. | $7 \times 2 =$ _____  | 48. | $2 \div 2 =$ _____  |
| 9.  | $3 \times 2 =$ _____  | 29. | $2 \times 2 =$ _____  | 49. | $18 \div 2 =$ _____ |
| 10. | $1 \times 2 =$ _____  | 30. | $1 \times 2 =$ _____  | 50. | $22 \div 2 =$ _____ |
| 11. | $8 \times 2 =$ _____  | 31. | $4 \div 2 =$ _____    | 51. | $14 \div 2 =$ _____ |
| 12. | $6 \times 2 =$ _____  | 32. | $8 \div 2 =$ _____    | 52. | $8 \div 2 =$ _____  |
| 13. | $7 \times 2 =$ _____  | 33. | $10 \div 2 =$ _____   | 53. | $6 \div 2 =$ _____  |
| 14. | $9 \times 2 =$ _____  | 34. | $18 \div 2 =$ _____   | 54. | $16 \div 2 =$ _____ |
| 15. | $12 \times 2 =$ _____ | 35. | $20 \div 2 =$ _____   | 55. | $10 \div 2 =$ _____ |
| 16. | $11 \times 2 =$ _____ | 36. | $24 \div 2 =$ _____   | 56. | $24 \div 2 =$ _____ |
| 17. | $2 \times 2 =$ _____  | 37. | $14 \div 2 =$ _____   | 57. | $20 \div 2 =$ _____ |
| 18. | $1 \times 2 =$ _____  | 38. | $12 \div 2 =$ _____   | 58. | $12 \div 2 =$ _____ |
| 19. | $10 \times 2 =$ _____ | 39. | $6 \div 2 =$ _____    | 59. | $2 \div 2 =$ _____  |
| 20. | $9 \times 2 =$ _____  | 40. | $2 \div 2 =$ _____    | 60. | $4 \div 2 =$ _____  |

**SCORE:**  
(5 minute limit)

**/60**

TIME TAKEN (optional)

--	--

MINUTES SECONDS



Name: \_\_\_\_\_

Date: \_\_\_\_\_

# MULTIPLICATION 1

## Practise 2s

Complete first and then use it to help you if you get stuck.

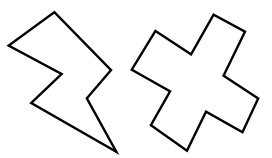
**ROCK BOX**

1.	$1 \times 2 =$	_____
2.	$2 \times 2 =$	_____
3.	$3 \times 2 =$	_____
4.	$4 \times 2 =$	_____
5.	$5 \times 2 =$	_____
6.	$6 \times 2 =$	_____
7.	$7 \times 2 =$	_____
8.	$8 \times 2 =$	_____
9.	$9 \times 2 =$	_____
10.	$10 \times 2 =$	_____
11.	$11 \times 2 =$	_____
12.	$12 \times 2 =$	_____

- |     |                 |       |     |                 |       |
|-----|-----------------|-------|-----|-----------------|-------|
| 21. | $11 \times 2 =$ | _____ | 41. | $9 \times 2 =$  | _____ |
| 22. | $4 \times 2 =$  | _____ | 42. | $5 \times 2 =$  | _____ |
| 23. | $10 \times 2 =$ | _____ | 43. | $3 \times 2 =$  | _____ |
| 24. | $8 \times 2 =$  | _____ | 44. | $2 \times 2 =$  | _____ |
| 25. | $9 \times 2 =$  | _____ | 45. | $12 \times 2 =$ | _____ |
| 26. | $1 \times 2 =$  | _____ | 46. | $10 \times 2 =$ | _____ |
| 27. | $3 \times 2 =$  | _____ | 47. | $11 \times 2 =$ | _____ |
| 28. | $12 \times 2 =$ | _____ | 48. | $1 \times 2 =$  | _____ |
| 29. | $4 \times 2 =$  | _____ | 49. | $5 \times 2 =$  | _____ |
| 30. | $9 \times 2 =$  | _____ | 50. | $7 \times 2 =$  | _____ |
| 31. | $8 \times 2 =$  | _____ | 51. | $8 \times 2 =$  | _____ |
| 32. | $7 \times 2 =$  | _____ | 52. | $11 \times 2 =$ | _____ |
| 33. | $11 \times 2 =$ | _____ | 53. | $10 \times 2 =$ | _____ |
| 34. | $7 \times 2 =$  | _____ | 54. | $6 \times 2 =$  | _____ |
| 35. | $1 \times 2 =$  | _____ | 55. | $9 \times 2 =$  | _____ |
| 36. | $12 \times 2 =$ | _____ | 56. | $4 \times 2 =$  | _____ |
| 37. | $2 \times 2 =$  | _____ | 57. | $3 \times 2 =$  | _____ |
| 38. | $5 \times 2 =$  | _____ | 58. | $6 \times 2 =$  | _____ |
| 39. | $4 \times 2 =$  | _____ | 59. | $9 \times 2 =$  | _____ |
| 40. | $6 \times 2 =$  | _____ | 60. | $11 \times 2 =$ | _____ |

Continue here...

- |     |                 |       |
|-----|-----------------|-------|
| 13. | $7 \times 2 =$  | _____ |
| 14. | $12 \times 2 =$ | _____ |
| 15. | $8 \times 2 =$  | _____ |
| 16. | $12 \times 2 =$ | _____ |
| 17. | $10 \times 2 =$ | _____ |
| 18. | $9 \times 2 =$  | _____ |
| 19. | $11 \times 2 =$ | _____ |
| 20. | $3 \times 2 =$  | _____ |



**SCORE:** \_\_\_\_\_



**Grown-ups:**  
Can learners spot links between neighbouring questions?



Name: \_\_\_\_\_

Date: \_\_\_\_\_

# MULTIPLICATION 2

## Practise 2s

Complete first and then use it to help you if you get stuck.

### ROCK BOX

1.  $1 \times 2 =$  \_\_\_\_\_

2.  $2 \times 2 =$  \_\_\_\_\_

3.  $3 \times 2 =$  \_\_\_\_\_

4.  $4 \times 2 =$  \_\_\_\_\_

5.  $5 \times 2 =$  \_\_\_\_\_

6.  $6 \times 2 =$  \_\_\_\_\_

7.  $7 \times 2 =$  \_\_\_\_\_

8.  $8 \times 2 =$  \_\_\_\_\_

9.  $9 \times 2 =$  \_\_\_\_\_

10.  $10 \times 2 =$  \_\_\_\_\_

11.  $11 \times 2 =$  \_\_\_\_\_

12.  $12 \times 2 =$  \_\_\_\_\_

13.  $2 \times 1 =$  \_\_\_\_\_

14.  $2 \times 2 =$  \_\_\_\_\_

15.  $2 \times 3 =$  \_\_\_\_\_

16.  $2 \times 4 =$  \_\_\_\_\_

17.  $2 \times 5 =$  \_\_\_\_\_

18.  $2 \times 6 =$  \_\_\_\_\_

19.  $2 \times 7 =$  \_\_\_\_\_

20.  $2 \times 8 =$  \_\_\_\_\_

21.  $2 \times 9 =$  \_\_\_\_\_

22.  $2 \times 10 =$  \_\_\_\_\_

23.  $2 \times 11 =$  \_\_\_\_\_

24.  $2 \times 12 =$  \_\_\_\_\_

41.  $2 \times 3 =$  \_\_\_\_\_

42.  $5 \times 2 =$  \_\_\_\_\_

43.  $2 \times 8 =$  \_\_\_\_\_

44.  $7 \times 2 =$  \_\_\_\_\_

45.  $8 \times 2 =$  \_\_\_\_\_

46.  $2 \times 12 =$  \_\_\_\_\_

47.  $4 \times 2 =$  \_\_\_\_\_

48.  $2 \times 2 =$  \_\_\_\_\_

49.  $1 \times 2 =$  \_\_\_\_\_

50.  $2 \times 5 =$  \_\_\_\_\_

51.  $2 \times 11 =$  \_\_\_\_\_

52.  $2 \times 1 =$  \_\_\_\_\_

53.  $2 \times 12 =$  \_\_\_\_\_

54.  $2 \times 7 =$  \_\_\_\_\_

55.  $2 \times 9 =$  \_\_\_\_\_

56.  $2 \times 6 =$  \_\_\_\_\_

57.  $2 \times 5 =$  \_\_\_\_\_

58.  $2 \times 10 =$  \_\_\_\_\_

59.  $2 \times 3 =$  \_\_\_\_\_

60.  $3 \times 2 =$  \_\_\_\_\_

### Continue here...

25.  $2 \times 4 =$  \_\_\_\_\_

26.  $1 \times 2 =$  \_\_\_\_\_

27.  $2 \times 5 =$  \_\_\_\_\_

28.  $6 \times 2 =$  \_\_\_\_\_

29.  $2 \times 6 =$  \_\_\_\_\_

30.  $5 \times 2 =$  \_\_\_\_\_

31.  $2 \times 2 =$  \_\_\_\_\_

32.  $4 \times 2 =$  \_\_\_\_\_

33.  $2 \times 7 =$  \_\_\_\_\_

34.  $2 \times 8 =$  \_\_\_\_\_

35.  $9 \times 2 =$  \_\_\_\_\_

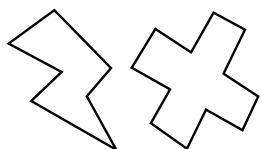
36.  $2 \times 11 =$  \_\_\_\_\_

37.  $12 \times 2 =$  \_\_\_\_\_

38.  $11 \times 2 =$  \_\_\_\_\_

39.  $2 \times 2 =$  \_\_\_\_\_

40.  $2 \times 1 =$  \_\_\_\_\_



# SCORE:

**Grown-ups:**  
Can learners spot links between neighbouring questions?



Name: \_\_\_\_\_

Date: \_\_\_\_\_

# MISSING NUMBER 1

## Practise 2s

Complete first and then use it to help you if you get stuck.

**ROCK BOX**

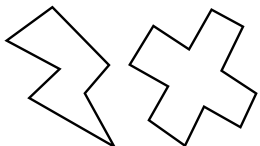
1.	_____	$\times 2 = 2$
2.	_____	$\times 2 = 4$
3.	_____	$\times 2 = 6$
4.	_____	$\times 2 = 8$
5.	_____	$\times 2 = 10$
6.	_____	$\times 2 = 12$
7.	_____	$\times 2 = 14$
8.	_____	$\times 2 = 16$
9.	_____	$\times 2 = 18$
10.	_____	$\times 2 = 20$
11.	_____	$\times 2 = 22$
12.	_____	$\times 2 = 24$

- 21. \_\_\_\_\_  $\times 2 = 10$
- 22. \_\_\_\_\_  $\times 2 = 4$
- 23. \_\_\_\_\_  $\times 2 = 12$
- 24. \_\_\_\_\_  $\times 2 = 24$
- 25. \_\_\_\_\_  $\times 2 = 20$
- 26. \_\_\_\_\_  $\times 2 = 18$
- 27. \_\_\_\_\_  $\times 2 = 22$
- 28. \_\_\_\_\_  $\times 2 = 14$
- 29. \_\_\_\_\_  $\times 2 = 8$
- 30. \_\_\_\_\_  $\times 2 = 6$
- 31. \_\_\_\_\_  $\times 2 = 2$
- 32. \_\_\_\_\_  $\times 2 = 22$
- 33. \_\_\_\_\_  $\times 2 = 16$
- 34. \_\_\_\_\_  $\times 2 = 10$
- 35. \_\_\_\_\_  $\times 2 = 2$
- 36. \_\_\_\_\_  $\times 2 = 8$
- 37. \_\_\_\_\_  $\times 2 = 12$
- 38. \_\_\_\_\_  $\times 2 = 14$
- 39. \_\_\_\_\_  $\times 2 = 18$
- 40. \_\_\_\_\_  $\times 2 = 24$

- 41. \_\_\_\_\_  $\times 2 = 4$
- 42. \_\_\_\_\_  $\times 2 = 6$
- 42. \_\_\_\_\_  $\times 2 = 2$
- 44. \_\_\_\_\_  $\times 2 = 10$
- 45. \_\_\_\_\_  $\times 2 = 14$
- 46. \_\_\_\_\_  $\times 2 = 8$
- 47. \_\_\_\_\_  $\times 2 = 16$
- 48. \_\_\_\_\_  $\times 2 = 24$
- 49. \_\_\_\_\_  $\times 2 = 20$
- 50. \_\_\_\_\_  $\times 2 = 18$
- 51. \_\_\_\_\_  $\times 2 = 12$
- 52. \_\_\_\_\_  $\times 2 = 6$
- 53. \_\_\_\_\_  $\times 2 = 22$
- 54. \_\_\_\_\_  $\times 2 = 2$
- 55. \_\_\_\_\_  $\times 2 = 4$
- 56. \_\_\_\_\_  $\times 2 = 14$
- 57. \_\_\_\_\_  $\times 2 = 10$
- 58. \_\_\_\_\_  $\times 2 = 16$
- 59. \_\_\_\_\_  $\times 2 = 18$
- 60. \_\_\_\_\_  $\times 2 = 20$

Continue here...

- 13. \_\_\_\_\_  $\times 2 = 8$
- 14. \_\_\_\_\_  $\times 2 = 2$
- 15. \_\_\_\_\_  $\times 2 = 20$
- 16. \_\_\_\_\_  $\times 2 = 18$
- 17. \_\_\_\_\_  $\times 2 = 24$
- 18. \_\_\_\_\_  $\times 2 = 22$
- 19. \_\_\_\_\_  $\times 2 = 16$
- 20. \_\_\_\_\_  $\times 2 = 14$



# SCORE:

**Grown-ups:**  
Can learners spot links between neighbouring questions?



Name: \_\_\_\_\_

Date: \_\_\_\_\_

# MISSING NUMBER 2

## Practise 2s

Complete first and then use it to help you if you get stuck.

ROCK BOX			
1.	$\times 2 = 2$	2.	$\times 1 = 2$
3.	$\times 2 = 4$	4.	$\times 2 = 4$
5.	$\times 2 = 6$	6.	$\times 3 = 6$
7.	$\times 2 = 8$	8.	$\times 4 = 8$
9.	$\times 2 = 10$	10.	$\times 5 = 10$
11.	$\times 2 = 12$	12.	$\times 6 = 12$
13.	$\times 2 = 14$	14.	$\times 7 = 14$
15.	$\times 2 = 16$	16.	$\times 8 = 16$
17.	$\times 2 = 18$	18.	$\times 9 = 18$
19.	$\times 2 = 20$	20.	$\times 10 = 20$
21.	$\times 2 = 22$	22.	$\times 11 = 22$
23.	$\times 2 = 24$	24.	$\times 12 = 24$

Continue here...

25. \_\_\_\_\_  $\times 2 = 18$

33. \_\_\_\_\_  $\times 1 = 2$

26. \_\_\_\_\_  $\times 9 = 18$

34. \_\_\_\_\_  $\times 11 = 22$

27. \_\_\_\_\_  $\times 2 = 12$

35. \_\_\_\_\_  $\times 9 = 18$

28. \_\_\_\_\_  $\times 7 = 14$

36. \_\_\_\_\_  $\times 2 = 24$

29. \_\_\_\_\_  $\times 8 = 16$

37. \_\_\_\_\_  $\times 2 = 14$

30. \_\_\_\_\_  $\times 2 = 22$

38. \_\_\_\_\_  $\times 5 = 10$

31. \_\_\_\_\_  $\times 12 = 24$

39. \_\_\_\_\_  $\times 2 = 12$

32. \_\_\_\_\_  $\times 2 = 2$

40. \_\_\_\_\_  $\times 3 = 6$

41. \_\_\_\_\_  $\times 4 = 8$

42. \_\_\_\_\_  $\times 2 = 4$

43. \_\_\_\_\_  $\times 2 = 16$

44. \_\_\_\_\_  $\times 12 = 24$

45. \_\_\_\_\_  $\times 6 = 12$

46. \_\_\_\_\_  $\times 7 = 14$

47. \_\_\_\_\_  $\times 2 = 18$

48. \_\_\_\_\_  $\times 11 = 22$

49. \_\_\_\_\_  $\times 2 = 20$

50. \_\_\_\_\_  $\times 2 = 2$

51. \_\_\_\_\_  $\times 2 = 24$

52. \_\_\_\_\_  $\times 2 = 6$

53. \_\_\_\_\_  $\times 2 = 8$

54. \_\_\_\_\_  $\times 2 = 10$

55. \_\_\_\_\_  $\times 2 = 20$

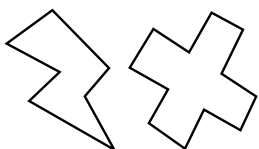
56. \_\_\_\_\_  $\times 2 = 4$

57. \_\_\_\_\_  $\times 8 = 16$

58. \_\_\_\_\_  $\times 1 = 2$

59. \_\_\_\_\_  $\times 9 = 18$

60. \_\_\_\_\_  $\times 12 = 24$



# SCORE:

**Grown-ups:**  
Can learners spot links between neighbouring questions?



Name: \_\_\_\_\_

Date: \_\_\_\_\_

# DIVISION 1

## Practise 2s

Complete first and then use it to help you if you get stuck.

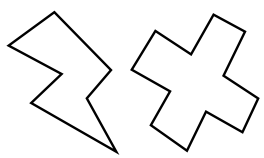
**ROCK BOX**

1.	$2 \div 2 =$	_____
2.	$4 \div 2 =$	_____
3.	$6 \div 2 =$	_____
4.	$8 \div 2 =$	_____
5.	$10 \div 2 =$	_____
6.	$12 \div 2 =$	_____
7.	$14 \div 2 =$	_____
8.	$16 \div 2 =$	_____
9.	$18 \div 2 =$	_____
10.	$20 \div 2 =$	_____
11.	$22 \div 2 =$	_____
12.	$24 \div 2 =$	_____

- |     |               |       |     |               |       |
|-----|---------------|-------|-----|---------------|-------|
| 21. | $22 \div 2 =$ | _____ | 41. | $18 \div 2 =$ | _____ |
| 22. | $18 \div 2 =$ | _____ | 42. | $16 \div 2 =$ | _____ |
| 23. | $10 \div 2 =$ | _____ | 43. | $4 \div 2 =$  | _____ |
| 24. | $8 \div 2 =$  | _____ | 44. | $12 \div 2 =$ | _____ |
| 25. | $6 \div 2 =$  | _____ | 45. | $14 \div 2 =$ | _____ |
| 26. | $12 \div 2 =$ | _____ | 46. | $12 \div 2 =$ | _____ |
| 27. | $24 \div 2 =$ | _____ | 47. | $10 \div 2 =$ | _____ |
| 28. | $16 \div 2 =$ | _____ | 48. | $16 \div 2 =$ | _____ |
| 29. | $8 \div 2 =$  | _____ | 49. | $4 \div 2 =$  | _____ |
| 30. | $20 \div 2 =$ | _____ | 50. | $2 \div 2 =$  | _____ |
| 31. | $22 \div 2 =$ | _____ | 51. | $8 \div 2 =$  | _____ |
| 32. | $18 \div 2 =$ | _____ | 52. | $18 \div 2 =$ | _____ |
| 33. | $14 \div 2 =$ | _____ | 53. | $6 \div 2 =$  | _____ |
| 34. | $2 \div 2 =$  | _____ | 54. | $16 \div 2 =$ | _____ |
| 35. | $10 \div 2 =$ | _____ | 55. | $22 \div 2 =$ | _____ |
| 36. | $16 \div 2 =$ | _____ | 56. | $20 \div 2 =$ | _____ |
| 37. | $24 \div 2 =$ | _____ | 57. | $24 \div 2 =$ | _____ |
| 38. | $6 \div 2 =$  | _____ | 58. | $14 \div 2 =$ | _____ |
| 39. | $2 \div 2 =$  | _____ | 59. | $10 \div 2 =$ | _____ |
| 40. | $12 \div 2 =$ | _____ | 60. | $12 \div 2 =$ | _____ |

Continue here...

- |     |               |       |
|-----|---------------|-------|
| 13. | $24 \div 2 =$ | _____ |
| 14. | $16 \div 2 =$ | _____ |
| 15. | $20 \div 2 =$ | _____ |
| 16. | $12 \div 2 =$ | _____ |
| 17. | $22 \div 2 =$ | _____ |
| 18. | $2 \div 2 =$  | _____ |
| 19. | $6 \div 2 =$  | _____ |
| 20. | $14 \div 2 =$ | _____ |



**SCORE:** \_\_\_\_\_



**Grown-ups:**  
Can learners spot links between neighbouring questions?



Name: \_\_\_\_\_

Date: \_\_\_\_\_

# DIVISION 2

## Practise 2s

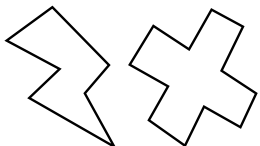
Complete first and then use it to help you if you get stuck.

ROCK BOX	
1. $2 \div 2 =$	2. $2 \div 1 =$
3. $4 \div 2 =$	4. $4 \div 2 =$
5. $6 \div 2 =$	6. $6 \div 3 =$
7. $8 \div 2 =$	8. $8 \div 4 =$
9. $10 \div 2 =$	10. $10 \div 5 =$
11. $12 \div 2 =$	12. $12 \div 6 =$
13. $14 \div 2 =$	14. $14 \div 7 =$
15. $16 \div 2 =$	16. $16 \div 8 =$
17. $18 \div 2 =$	18. $18 \div 9 =$
19. $20 \div 2 =$	20. $20 \div 10 =$
21. $22 \div 2 =$	22. $22 \div 11 =$
23. $24 \div 2 =$	24. $24 \div 12 =$

Continue here...

- |                         |                          |
|-------------------------|--------------------------|
| 25. $10 \div 5 =$ _____ | 33. $12 \div 6 =$ _____  |
| 26. $6 \div 2 =$ _____  | 34. $10 \div 2 =$ _____  |
| 27. $10 \div 2 =$ _____ | 35. $12 \div 2 =$ _____  |
| 28. $20 \div 2 =$ _____ | 36. $18 \div 9 =$ _____  |
| 29. $6 \div 3 =$ _____  | 37. $22 \div 11 =$ _____ |
| 30. $2 \div 2 =$ _____  | 38. $18 \div 2 =$ _____  |
| 31. $2 \div 1 =$ _____  | 39. $8 \div 2 =$ _____   |
| 32. $4 \div 2 =$ _____  | 40. $14 \div 7 =$ _____  |

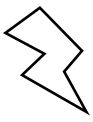
41.  $16 \div 8 =$  \_\_\_\_\_
42.  $12 \div 6 =$  \_\_\_\_\_
43.  $10 \div 2 =$  \_\_\_\_\_
44.  $24 \div 12 =$  \_\_\_\_\_
45.  $20 \div 2 =$  \_\_\_\_\_
46.  $6 \div 2 =$  \_\_\_\_\_
47.  $14 \div 2 =$  \_\_\_\_\_
48.  $2 \div 1 =$  \_\_\_\_\_
49.  $22 \div 2 =$  \_\_\_\_\_
50.  $8 \div 4 =$  \_\_\_\_\_
51.  $8 \div 2 =$  \_\_\_\_\_
52.  $16 \div 2 =$  \_\_\_\_\_
53.  $18 \div 9 =$  \_\_\_\_\_
54.  $16 \div 8 =$  \_\_\_\_\_
55.  $20 \div 2 =$  \_\_\_\_\_
56.  $12 \div 2 =$  \_\_\_\_\_
57.  $4 \div 2 =$  \_\_\_\_\_
58.  $6 \div 3 =$  \_\_\_\_\_
59.  $14 \div 2 =$  \_\_\_\_\_
60.  $10 \div 5 =$  \_\_\_\_\_



# SCORE:

**Grown-ups:**  
Can learners spot links between neighbouring questions?





# CHECK 1



Name: \_\_\_\_\_

Date: \_\_\_\_\_

- |     |                       |     |                       |     |                     |
|-----|-----------------------|-----|-----------------------|-----|---------------------|
| 1.  | $8 \times 2 =$ _____  | 21. | $8 \times 2 =$ _____  | 41. | $4 \div 2 =$ _____  |
| 2.  | $2 \times 2 =$ _____  | 22. | $10 \times 2 =$ _____ | 42. | $20 \div 2 =$ _____ |
| 3.  | $5 \times 2 =$ _____  | 23. | $12 \times 2 =$ _____ | 43. | $16 \div 2 =$ _____ |
| 4.  | $4 \times 2 =$ _____  | 24. | $9 \times 2 =$ _____  | 44. | $2 \div 2 =$ _____  |
| 5.  | $3 \times 2 =$ _____  | 25. | $2 \times 2 =$ _____  | 45. | $10 \div 2 =$ _____ |
| 6.  | $6 \times 2 =$ _____  | 26. | $1 \times 2 =$ _____  | 46. | $18 \div 2 =$ _____ |
| 7.  | $7 \times 2 =$ _____  | 27. | $5 \times 2 =$ _____  | 47. | $14 \div 2 =$ _____ |
| 8.  | $10 \times 2 =$ _____ | 28. | $4 \times 2 =$ _____  | 48. | $2 \div 2 =$ _____  |
| 9.  | $12 \times 2 =$ _____ | 29. | $3 \times 2 =$ _____  | 49. | $20 \div 2 =$ _____ |
| 10. | $1 \times 2 =$ _____  | 30. | $6 \times 2 =$ _____  | 50. | $24 \div 2 =$ _____ |
| 11. | $9 \times 2 =$ _____  | 31. | $6 \div 2 =$ _____    | 51. | $8 \div 2 =$ _____  |
| 12. | $2 \times 2 =$ _____  | 32. | $12 \div 2 =$ _____   | 52. | $12 \div 2 =$ _____ |
| 13. | $11 \times 2 =$ _____ | 33. | $18 \div 2 =$ _____   | 53. | $10 \div 2 =$ _____ |
| 14. | $7 \times 2 =$ _____  | 34. | $10 \div 2 =$ _____   | 54. | $6 \div 2 =$ _____  |
| 15. | $9 \times 2 =$ _____  | 35. | $20 \div 2 =$ _____   | 55. | $20 \div 2 =$ _____ |
| 16. | $4 \times 2 =$ _____  | 36. | $2 \div 2 =$ _____    | 56. | $22 \div 2 =$ _____ |
| 17. | $3 \times 2 =$ _____  | 37. | $22 \div 2 =$ _____   | 57. | $18 \div 2 =$ _____ |
| 18. | $6 \times 2 =$ _____  | 38. | $24 \div 2 =$ _____   | 58. | $2 \div 2 =$ _____  |
| 19. | $1 \times 2 =$ _____  | 39. | $16 \div 2 =$ _____   | 59. | $4 \div 2 =$ _____  |
| 20. | $5 \times 2 =$ _____  | 40. | $18 \div 2 =$ _____   | 60. | $8 \div 2 =$ _____  |

**SCORE:**  
(5 minute limit)

**/60**

TIME TAKEN (optional)

--	--

MINUTES SECONDS



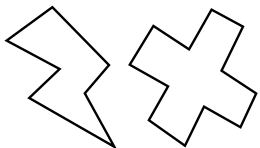
Name: \_\_\_\_\_

Date: \_\_\_\_\_

# MULTIPLICATION 3

## Practise 2s

- |     |                       |     |                       |     |                       |
|-----|-----------------------|-----|-----------------------|-----|-----------------------|
| 1.  | $2 \times 5 =$ _____  | 21. | $2 \times 8 =$ _____  | 41. | $1 \times 2 =$ _____  |
| 2.  | $2 \times 3 =$ _____  | 22. | $2 \times 1 =$ _____  | 42. | $2 \times 12 =$ _____ |
| 3.  | $3 \times 2 =$ _____  | 23. | $2 \times 2 =$ _____  | 43. | $11 \times 2 =$ _____ |
| 4.  | $2 \times 7 =$ _____  | 24. | $4 \times 2 =$ _____  | 44. | $2 \times 7 =$ _____  |
| 5.  | $2 \times 4 =$ _____  | 25. | $2 \times 6 =$ _____  | 45. | $2 \times 1 =$ _____  |
| 6.  | $7 \times 2 =$ _____  | 26. | $9 \times 2 =$ _____  | 46. | $2 \times 3 =$ _____  |
| 7.  | $5 \times 2 =$ _____  | 27. | $2 \times 12 =$ _____ | 47. | $12 \times 2 =$ _____ |
| 8.  | $2 \times 8 =$ _____  | 28. | $11 \times 2 =$ _____ | 48. | $9 \times 2 =$ _____  |
| 9.  | $9 \times 2 =$ _____  | 29. | $2 \times 1 =$ _____  | 49. | $2 \times 6 =$ _____  |
| 10. | $2 \times 11 =$ _____ | 30. | $10 \times 2 =$ _____ | 50. | $3 \times 2 =$ _____  |
| 11. | $12 \times 2 =$ _____ | 31. | $2 \times 11 =$ _____ | 51. | $5 \times 2 =$ _____  |
| 12. | $2 \times 12 =$ _____ | 32. | $2 \times 5 =$ _____  | 52. | $10 \times 2 =$ _____ |
| 13. | $1 \times 2 =$ _____  | 33. | $2 \times 3 =$ _____  | 53. | $2 \times 5 =$ _____  |
| 14. | $2 \times 10 =$ _____ | 34. | $10 \times 2 =$ _____ | 54. | $8 \times 2 =$ _____  |
| 15. | $2 \times 7 =$ _____  | 35. | $7 \times 2 =$ _____  | 55. | $2 \times 2 =$ _____  |
| 16. | $6 \times 2 =$ _____  | 36. | $2 \times 4 =$ _____  | 56. | $2 \times 4 =$ _____  |
| 17. | $3 \times 2 =$ _____  | 37. | $2 \times 3 =$ _____  | 57. | $7 \times 2 =$ _____  |
| 18. | $1 \times 2 =$ _____  | 38. | $2 \times 2 =$ _____  | 58. | $9 \times 2 =$ _____  |
| 19. | $4 \times 2 =$ _____  | 39. | $9 \times 2 =$ _____  | 59. | $2 \times 8 =$ _____  |
| 20. | $8 \times 2 =$ _____  | 40. | $2 \times 8 =$ _____  | 60. | $6 \times 2 =$ _____  |



**SCORE:**

**Grown-ups:**  
Can learners spot links between neighbouring questions?



Name: \_\_\_\_\_

# MISSING NUMBERS 3

## Practise 2s

Date: \_\_\_\_\_

1. \_\_\_\_\_  $\times 2 = 22$

21. \_\_\_\_\_  $\times 2 = 8$

41. \_\_\_\_\_  $\times 2 = 2$

2. \_\_\_\_\_  $\times 2 = 24$

22. \_\_\_\_\_  $\times 12 = 24$

42. \_\_\_\_\_  $\times 11 = 22$

3. \_\_\_\_\_  $\times 7 = 14$

23. \_\_\_\_\_  $\times 2 = 16$

43. \_\_\_\_\_  $\times 2 = 16$

4. \_\_\_\_\_  $\times 2 = 10$

24. \_\_\_\_\_  $\times 7 = 14$

44. \_\_\_\_\_  $\times 9 = 18$

5. \_\_\_\_\_  $\times 9 = 18$

25. \_\_\_\_\_  $\times 5 = 10$

45. \_\_\_\_\_  $\times 2 = 18$

6. \_\_\_\_\_  $\times 6 = 12$

26. \_\_\_\_\_  $\times 6 = 12$

46. \_\_\_\_\_  $\times 2 = 20$

7. \_\_\_\_\_  $\times 2 = 12$

27. \_\_\_\_\_  $\times 2 = 4$

47. \_\_\_\_\_  $\times 2 = 8$

8. \_\_\_\_\_  $\times 4 = 8$

28. \_\_\_\_\_  $\times 1 = 2$

48. \_\_\_\_\_  $\times 2 = 4$

9. \_\_\_\_\_  $\times 9 = 18$

29. \_\_\_\_\_  $\times 2 = 20$

49. \_\_\_\_\_  $\times 1 = 2$

10. \_\_\_\_\_  $\times 3 = 6$

30. \_\_\_\_\_  $\times 2 = 22$

50. \_\_\_\_\_  $\times 2 = 16$

11. \_\_\_\_\_  $\times 2 = 4$

31. \_\_\_\_\_  $\times 9 = 18$

51. \_\_\_\_\_  $\times 6 = 12$

12. \_\_\_\_\_  $\times 1 = 2$

32. \_\_\_\_\_  $\times 4 = 8$

52. \_\_\_\_\_  $\times 4 = 8$

13. \_\_\_\_\_  $\times 2 = 2$

33. \_\_\_\_\_  $\times 2 = 6$

53. \_\_\_\_\_  $\times 2 = 10$

14. \_\_\_\_\_  $\times 2 = 20$

34. \_\_\_\_\_  $\times 2 = 20$

54. \_\_\_\_\_  $\times 2 = 14$

15. \_\_\_\_\_  $\times 2 = 22$

35. \_\_\_\_\_  $\times 2 = 6$

55. \_\_\_\_\_  $\times 9 = 18$

16. \_\_\_\_\_  $\times 2 = 14$

36. \_\_\_\_\_  $\times 5 = 10$

56. \_\_\_\_\_  $\times 2 = 22$

17. \_\_\_\_\_  $\times 5 = 10$

37. \_\_\_\_\_  $\times 2 = 18$

57. \_\_\_\_\_  $\times 12 = 24$

18. \_\_\_\_\_  $\times 8 = 16$

38. \_\_\_\_\_  $\times 4 = 8$

58. \_\_\_\_\_  $\times 2 = 24$

19. \_\_\_\_\_  $\times 2 = 8$

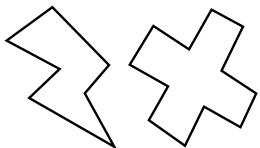
39. \_\_\_\_\_  $\times 2 = 2$

59. \_\_\_\_\_  $\times 2 = 6$

20. \_\_\_\_\_  $\times 2 = 14$

40. \_\_\_\_\_  $\times 6 = 12$

60. \_\_\_\_\_  $\times 2 = 18$



**SCORE:**

**Grown-ups:**  
Can learners spot links between neighbouring questions?



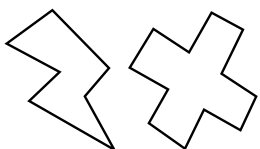
Name: \_\_\_\_\_

Date: \_\_\_\_\_

# DIVISION 3

## Practise 2s

- |     |                      |     |                      |     |                      |
|-----|----------------------|-----|----------------------|-----|----------------------|
| 1.  | $14 \div 7 =$ _____  | 21. | $24 \div 2 =$ _____  | 41. | $16 \div 2 =$ _____  |
| 2.  | $14 \div 2 =$ _____  | 22. | $12 \div 2 =$ _____  | 42. | $18 \div 2 =$ _____  |
| 3.  | $6 \div 3 =$ _____   | 23. | $18 \div 2 =$ _____  | 43. | $14 \div 7 =$ _____  |
| 4.  | $4 \div 2 =$ _____   | 24. | $14 \div 7 =$ _____  | 44. | $22 \div 11 =$ _____ |
| 5.  | $16 \div 2 =$ _____  | 25. | $6 \div 2 =$ _____   | 45. | $22 \div 2 =$ _____  |
| 6.  | $8 \div 4 =$ _____   | 26. | $20 \div 2 =$ _____  | 46. | $2 \div 1 =$ _____   |
| 7.  | $20 \div 2 =$ _____  | 27. | $10 \div 5 =$ _____  | 47. | $20 \div 2 =$ _____  |
| 8.  | $22 \div 11 =$ _____ | 28. | $14 \div 2 =$ _____  | 48. | $18 \div 9 =$ _____  |
| 9.  | $22 \div 2 =$ _____  | 29. | $8 \div 4 =$ _____   | 49. | $16 \div 8 =$ _____  |
| 10. | $14 \div 2 =$ _____  | 30. | $12 \div 2 =$ _____  | 50. | $8 \div 2 =$ _____   |
| 11. | $10 \div 5 =$ _____  | 31. | $8 \div 2 =$ _____   | 51. | $8 \div 4 =$ _____   |
| 12. | $24 \div 12 =$ _____ | 32. | $6 \div 3 =$ _____   | 52. | $12 \div 2 =$ _____  |
| 13. | $24 \div 2 =$ _____  | 33. | $18 \div 9 =$ _____  | 53. | $6 \div 2 =$ _____   |
| 14. | $16 \div 2 =$ _____  | 34. | $20 \div 2 =$ _____  | 54. | $14 \div 2 =$ _____  |
| 15. | $22 \div 2 =$ _____  | 35. | $22 \div 2 =$ _____  | 55. | $6 \div 3 =$ _____   |
| 16. | $10 \div 2 =$ _____  | 36. | $20 \div 2 =$ _____  | 56. | $24 \div 2 =$ _____  |
| 17. | $12 \div 6 =$ _____  | 37. | $24 \div 12 =$ _____ | 57. | $12 \div 2 =$ _____  |
| 18. | $6 \div 2 =$ _____   | 38. | $2 \div 1 =$ _____   | 58. | $10 \div 2 =$ _____  |
| 19. | $6 \div 3 =$ _____   | 39. | $2 \div 2 =$ _____   | 59. | $4 \div 2 =$ _____   |
| 20. | $18 \div 9 =$ _____  | 40. | $16 \div 8 =$ _____  | 60. | $24 \div 2 =$ _____  |



**SCORE:**

**Grown-ups:**  
Can learners spot links between neighbouring questions?



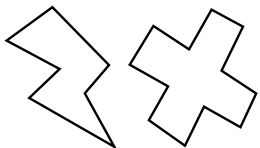
Name: \_\_\_\_\_

Date: \_\_\_\_\_

# MULTIPLICATION 4

## Practise 2s

- |     |                       |     |                       |     |                       |
|-----|-----------------------|-----|-----------------------|-----|-----------------------|
| 1.  | $12 \times 2 =$ _____ | 21. | $1 \times 2 =$ _____  | 41. | $2 \times 3 =$ _____  |
| 2.  | $11 \times 2 =$ _____ | 22. | $2 \times 4 =$ _____  | 42. | $2 \times 2 =$ _____  |
| 3.  | $2 \times 8 =$ _____  | 23. | $4 \times 2 =$ _____  | 43. | $8 \times 2 =$ _____  |
| 4.  | $9 \times 2 =$ _____  | 24. | $2 \times 3 =$ _____  | 44. | $2 \times 4 =$ _____  |
| 5.  | $2 \times 7 =$ _____  | 25. | $2 \times 6 =$ _____  | 45. | $2 \times 2 =$ _____  |
| 6.  | $2 \times 5 =$ _____  | 26. | $9 \times 2 =$ _____  | 46. | $1 \times 2 =$ _____  |
| 7.  | $6 \times 2 =$ _____  | 27. | $2 \times 8 =$ _____  | 47. | $11 \times 2 =$ _____ |
| 8.  | $2 \times 4 =$ _____  | 28. | $2 \times 10 =$ _____ | 48. | $12 \times 2 =$ _____ |
| 9.  | $3 \times 2 =$ _____  | 29. | $11 \times 2 =$ _____ | 49. | $2 \times 7 =$ _____  |
| 10. | $2 \times 3 =$ _____  | 30. | $2 \times 6 =$ _____  | 50. | $10 \times 2 =$ _____ |
| 11. | $6 \times 2 =$ _____  | 31. | $6 \times 2 =$ _____  | 51. | $4 \times 2 =$ _____  |
| 12. | $7 \times 2 =$ _____  | 32. | $9 \times 2 =$ _____  | 52. | $2 \times 9 =$ _____  |
| 13. | $10 \times 2 =$ _____ | 33. | $3 \times 2 =$ _____  | 53. | $6 \times 2 =$ _____  |
| 14. | $2 \times 12 =$ _____ | 34. | $5 \times 2 =$ _____  | 54. | $2 \times 8 =$ _____  |
| 15. | $11 \times 2 =$ _____ | 35. | $2 \times 8 =$ _____  | 55. | $4 \times 2 =$ _____  |
| 16. | $6 \times 2 =$ _____  | 36. | $2 \times 11 =$ _____ | 56. | $11 \times 2 =$ _____ |
| 17. | $2 \times 8 =$ _____  | 37. | $2 \times 10 =$ _____ | 57. | $2 \times 3 =$ _____  |
| 18. | $2 \times 3 =$ _____  | 38. | $1 \times 2 =$ _____  | 58. | $2 \times 10 =$ _____ |
| 19. | $2 \times 2 =$ _____  | 39. | $2 \times 2 =$ _____  | 59. | $2 \times 6 =$ _____  |
| 20. | $2 \times 1 =$ _____  | 40. | $2 \times 5 =$ _____  | 60. | $9 \times 2 =$ _____  |



**SCORE:**



**Grown-ups:**  
Can learners spot links between neighbouring questions?



Name: \_\_\_\_\_

# MISSING NUMBERS 4

Date: \_\_\_\_\_

## Practise 2s

1. \_\_\_\_\_  $\times 2 = 12$

21. \_\_\_\_\_  $\times 2 = 10$

41. \_\_\_\_\_  $\times 2 = 12$

2. \_\_\_\_\_  $\times 9 = 18$

22. \_\_\_\_\_  $\times 2 = 8$

42. \_\_\_\_\_  $\times 5 = 10$

3. \_\_\_\_\_  $\times 8 = 16$

23. \_\_\_\_\_  $\times 3 = 6$

43. \_\_\_\_\_  $\times 2 = 20$

4. \_\_\_\_\_  $\times 4 = 8$

24. \_\_\_\_\_  $\times 6 = 12$

44. \_\_\_\_\_  $\times 2 = 2$

5. \_\_\_\_\_  $\times 2 = 6$

25. \_\_\_\_\_  $\times 2 = 14$

45. \_\_\_\_\_  $\times 9 = 18$

6. \_\_\_\_\_  $\times 2 = 10$

26. \_\_\_\_\_  $\times 2 = 10$

46. \_\_\_\_\_  $\times 2 = 22$

7. \_\_\_\_\_  $\times 6 = 12$

27. \_\_\_\_\_  $\times 2 = 18$

47. \_\_\_\_\_  $\times 7 = 14$

8. \_\_\_\_\_  $\times 2 = 2$

28. \_\_\_\_\_  $\times 8 = 16$

48. \_\_\_\_\_  $\times 3 = 6$

9. \_\_\_\_\_  $\times 2 = 4$

29. \_\_\_\_\_  $\times 2 = 2$

49. \_\_\_\_\_  $\times 2 = 4$

10. \_\_\_\_\_  $\times 2 = 20$

30. \_\_\_\_\_  $\times 12 = 24$

50. \_\_\_\_\_  $\times 2 = 8$

11. \_\_\_\_\_  $\times 12 = 24$

31. \_\_\_\_\_  $\times 2 = 6$

51. \_\_\_\_\_  $\times 5 = 10$

12. \_\_\_\_\_  $\times 2 = 12$

32. \_\_\_\_\_  $\times 2 = 4$

52. \_\_\_\_\_  $\times 2 = 12$

13. \_\_\_\_\_  $\times 2 = 14$

33. \_\_\_\_\_  $\times 6 = 12$

53. \_\_\_\_\_  $\times 2 = 20$

14. \_\_\_\_\_  $\times 1 = 2$

34. \_\_\_\_\_  $\times 2 = 4$

54. \_\_\_\_\_  $\times 12 = 24$

15. \_\_\_\_\_  $\times 2 = 4$

35. \_\_\_\_\_  $\times 2 = 2$

55. \_\_\_\_\_  $\times 1 = 2$

16. \_\_\_\_\_  $\times 2 = 22$

36. \_\_\_\_\_  $\times 12 = 24$

56. \_\_\_\_\_  $\times 2 = 20$

17. \_\_\_\_\_  $\times 9 = 18$

37. \_\_\_\_\_  $\times 9 = 18$

57. \_\_\_\_\_  $\times 9 = 18$

18. \_\_\_\_\_  $\times 2 = 20$

38. \_\_\_\_\_  $\times 2 = 8$

58. \_\_\_\_\_  $\times 2 = 8$

19. \_\_\_\_\_  $\times 6 = 12$

39. \_\_\_\_\_  $\times 2 = 6$

59. \_\_\_\_\_  $\times 2 = 14$

20. \_\_\_\_\_  $\times 2 = 14$

40. \_\_\_\_\_  $\times 8 = 16$

60. \_\_\_\_\_  $\times 7 = 14$



**SCORE:**

**Grown-ups:**  
Can learners spot links between neighbouring questions?



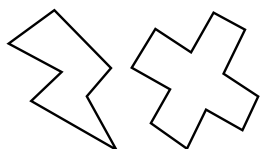
Name: \_\_\_\_\_

Date: \_\_\_\_\_

# DIVISION 4

## Practise 2s

- |     |                      |     |                      |     |                      |
|-----|----------------------|-----|----------------------|-----|----------------------|
| 1.  | $24 \div 2 =$ _____  | 21. | $20 \div 2 =$ _____  | 41. | $24 \div 2 =$ _____  |
| 2.  | $22 \div 2 =$ _____  | 22. | $24 \div 2 =$ _____  | 42. | $2 \div 1 =$ _____   |
| 3.  | $2 \div 1 =$ _____   | 23. | $22 \div 11 =$ _____ | 43. | $2 \div 2 =$ _____   |
| 4.  | $2 \div 2 =$ _____   | 24. | $14 \div 2 =$ _____  | 44. | $8 \div 2 =$ _____   |
| 5.  | $18 \div 9 =$ _____  | 25. | $14 \div 7 =$ _____  | 45. | $14 \div 7 =$ _____  |
| 6.  | $16 \div 2 =$ _____  | 26. | $8 \div 2 =$ _____   | 46. | $14 \div 2 =$ _____  |
| 7.  | $10 \div 2 =$ _____  | 27. | $10 \div 2 =$ _____  | 47. | $18 \div 9 =$ _____  |
| 8.  | $12 \div 6 =$ _____  | 28. | $18 \div 2 =$ _____  | 48. | $20 \div 2 =$ _____  |
| 9.  | $14 \div 7 =$ _____  | 29. | $18 \div 9 =$ _____  | 49. | $22 \div 2 =$ _____  |
| 10. | $20 \div 2 =$ _____  | 30. | $16 \div 2 =$ _____  | 50. | $4 \div 2 =$ _____   |
| 11. | $6 \div 3 =$ _____   | 31. | $12 \div 2 =$ _____  | 51. | $22 \div 11 =$ _____ |
| 12. | $4 \div 2 =$ _____   | 32. | $8 \div 4 =$ _____   | 52. | $6 \div 2 =$ _____   |
| 13. | $10 \div 2 =$ _____  | 33. | $2 \div 2 =$ _____   | 53. | $24 \div 12 =$ _____ |
| 14. | $12 \div 2 =$ _____  | 34. | $10 \div 5 =$ _____  | 54. | $8 \div 2 =$ _____   |
| 15. | $18 \div 2 =$ _____  | 35. | $14 \div 7 =$ _____  | 55. | $14 \div 2 =$ _____  |
| 16. | $8 \div 2 =$ _____   | 36. | $4 \div 2 =$ _____   | 56. | $12 \div 6 =$ _____  |
| 17. | $8 \div 4 =$ _____   | 37. | $18 \div 9 =$ _____  | 57. | $2 \div 2 =$ _____   |
| 18. | $16 \div 8 =$ _____  | 38. | $6 \div 2 =$ _____   | 58. | $4 \div 2 =$ _____   |
| 19. | $2 \div 2 =$ _____   | 39. | $22 \div 11 =$ _____ | 59. | $20 \div 2 =$ _____  |
| 20. | $24 \div 12 =$ _____ | 40. | $12 \div 6 =$ _____  | 60. | $2 \div 1 =$ _____   |



**SCORE:**

**Grown-ups:**  
Can learners spot links  
between neighbouring  
questions?





# CHECK 2



Name: \_\_\_\_\_

Date: \_\_\_\_\_

- |                           |                           |                         |
|---------------------------|---------------------------|-------------------------|
| 1. $9 \times 2 =$ _____   | 21. $3 \times 2 =$ _____  | 41. $2 \div 2 =$ _____  |
| 2. $4 \times 2 =$ _____   | 22. $10 \times 2 =$ _____ | 42. $18 \div 2 =$ _____ |
| 3. $12 \times 2 =$ _____  | 23. $2 \times 2 =$ _____  | 43. $14 \div 2 =$ _____ |
| 4. $3 \times 2 =$ _____   | 24. $4 \times 2 =$ _____  | 44. $22 \div 2 =$ _____ |
| 5. $6 \times 2 =$ _____   | 25. $8 \times 2 =$ _____  | 45. $4 \div 2 =$ _____  |
| 6. $10 \times 2 =$ _____  | 26. $6 \times 2 =$ _____  | 46. $20 \div 2 =$ _____ |
| 7. $12 \times 2 =$ _____  | 27. $12 \times 2 =$ _____ | 47. $24 \div 2 =$ _____ |
| 8. $2 \times 2 =$ _____   | 28. $5 \times 2 =$ _____  | 48. $2 \div 2 =$ _____  |
| 9. $1 \times 2 =$ _____   | 29. $1 \times 2 =$ _____  | 49. $6 \div 2 =$ _____  |
| 10. $8 \times 2 =$ _____  | 30. $7 \times 2 =$ _____  | 50. $16 \div 2 =$ _____ |
| 11. $4 \times 2 =$ _____  | 31. $18 \div 2 =$ _____   | 51. $8 \div 2 =$ _____  |
| 12. $5 \times 2 =$ _____  | 32. $10 \div 2 =$ _____   | 52. $14 \div 2 =$ _____ |
| 13. $7 \times 2 =$ _____  | 33. $8 \div 2 =$ _____    | 53. $6 \div 2 =$ _____  |
| 14. $6 \times 2 =$ _____  | 34. $20 \div 2 =$ _____   | 54. $22 \div 2 =$ _____ |
| 15. $10 \times 2 =$ _____ | 35. $22 \div 2 =$ _____   | 55. $20 \div 2 =$ _____ |
| 16. $12 \times 2 =$ _____ | 36. $6 \div 2 =$ _____    | 56. $10 \div 2 =$ _____ |
| 17. $1 \times 2 =$ _____  | 37. $12 \div 2 =$ _____   | 57. $4 \div 2 =$ _____  |
| 18. $11 \times 2 =$ _____ | 38. $14 \div 2 =$ _____   | 58. $14 \div 2 =$ _____ |
| 19. $9 \times 2 =$ _____  | 39. $10 \div 2 =$ _____   | 59. $12 \div 2 =$ _____ |
| 20. $7 \times 2 =$ _____  | 40. $16 \div 2 =$ _____   | 60. $2 \div 2 =$ _____  |

**SCORE:**  
(5 minute limit)

**/60**

TIME TAKEN (optional)

MINUTES SECONDS

